

Q.1 Four letter-clusters have been given, out of which three are alike in some manner and one is different. Select the letter-cluster that is different.

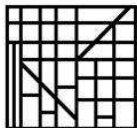
- Ans ☒ 1. TVYB
☒ 2. LNQJ
☒ 3. HJMP
☒ 4. BDGT

Question ID : 81616113517

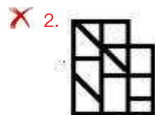
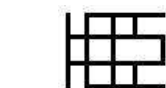
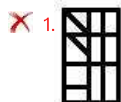
Status : **Answered**

Chosen Option : 2

Q.2 Select the option figure that is embedded in the given figure (rotation is NOT allowed).



Ans



☒ 3.

☒ 4.

Question ID : 81616113536

Status : **Answered** Chosen

Option : 3

Q.3 Seven years from now, Anamika will be as old as Malini was 4 years ago. Srinidhi was born 2 years ago. The average age of Anamika, Malini and Srinidhi 10 years from now will be 33 years. What is the present age of Anamika?

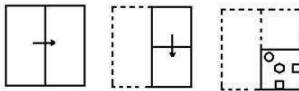
- Ans**
- ☒ 1. 30 years
 - ☒ 2. 29 years
 - ☒ 3. 28 years
 - ☒ 4. 31 years

Question ID : 81616113532

Status : **Not Answered**

Chosen Option : --

Q.4 The sequence of folding a piece of paper and the manner in which the folded paper has been cut is shown in the following figures. How would this paper look when unfolded?



Ans

- ☒ 1.
- ☒ 2.
- ☒ 3.
- ☒ 4.

Question ID : 81616113538

Status : **Answered**

Chosen Option : 1


Q.5 Select the option in which the numbers are related in the same way as are the numbers of the following set.

(24, 10, 392)

Ans  1. (26, 12, 369)

 2. (27, 15, 480)

 3. (29, 18, 242)

 4. (21, 18, 234)

Question ID : **81616114236**

Status : **Answered**

Chosen Option : **3**

Q.6 Four number-pairs have been given, out of which three are alike in some manner and one is different. Select the number-pair that is different.

Ans ☒ 1. 12 : 432

☒ 2. 7 : 147

☒ 3. 8 : 192

☒ 4. 13 : 506

Question ID : 81616113023

Status : Answered

Chosen Option : 4

Q.7 Select the option that is related to the fourth number in the same way as the first number is related to the second number and the fifth number is related to the sixth number.

17 : 293 :: ? : 488 :: 21 : 445

Ans ☒ 1. 22

☒ 2. 20

☒ 3. 28

☒ 4. 24

Question ID : 81616114234

Status : Answered

Chosen Option : 1

Q.8 Select the option in which the words share the same relationship as that shared by the given pair of words.

Resistance : Ohm

Ans ☒ 1. Force : Watt

☒ 2. Ampere : Current

☒ 3. Density : Joule

☒ 4. Angle : Radians

Question ID : 81616113520

Status : Answered

Chosen Option : 4

Q.9

Select the correct mirror image of the given combination when the mirror is placed at 'PQ' as shown.

T g 3 c 7 J U a Q

Ans

1. L 8 3 c 7 J U a Q
2. L 8 3 c 7 J U a Q
3. Q a U 7 c 3 g T
4. Q a U 7 c 3 g T


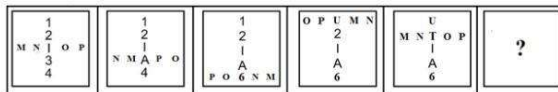
Question ID : 81616113537

Status : Answered

Chosen Option : 3


Q.10


Select the figure from among the given options that can replace the question mark (?) in the following series.




Q.13 Select the correct combination of mathematical signs that can sequentially replace the * signs and balance the equation.

$$60 * 2 * 3 * 6 * 5 * 43$$

Ans  1. $\div, \times, +, -, =$

 2. $\div, +, \times, =, -$

 3. $\div, +, \times, -, =$

 4. $+, \div, \times, =, -$

Question ID : 81616113026

Status : Answered

Chosen Option : 3

Q.14 Select the letter-cluster from among the given options that can replace the question mark (?) in the following series.

CMQR, BONV, AQKZ, ZSHD, ?

Ans  1. ZVGH

 2. YUEH

 3. YVEI

 4. ZUDH

Question ID : 81616113515

Status : Answered

Chosen Option : 2

Q.15 Select the number from among the given options that can replace the question mark (?) in the following series.

4, 11, 31, 65, 193, ?

Ans  1. 368

 2. 398

 3. 386

 4. 389

Question ID : 81616113526

Status : Answered

Chosen Option : 4

Q.16 In a certain code language, 'VIRTUE' is coded as '201' and 'TRAGEDY' is coded as '218'. How will 'PROFANE' be coded in that language?

Ans  1. 570

 2. 342

 3. 432

 4. 456

Question ID : 81616113017

Status : Not Answered

Chosen Option : --

Q.23 In a certain code language, 'DOLPHIN' is written as 'EPMPGHH'. How will 'CORDIAL' be written in that language?

- Ans ☐ 1. EPTDZHCK
☐ 2. DPSDHAK
☒ 3. DPSDHZK
☐ 4. DPSEGZK

Question ID : 81616114228

Status : Answered

Chosen Option : 4

Q.24 Select the correct option that indicates the arrangement of the given words in the order in which they appear in an English dictionary.

1. Protest
2. Palindrome
3. Probability
4. Pathetic
5. Parking

- Ans ☐ 1. 2, 4, 5, 3, 1
☐ 2. 2, 1, 3, 4, 5
☒ 3. 2, 5, 4, 3, 1
☐ 4. 2, 5, 1, 4, 3

Question ID : 81616113516

Status : Answered

Chosen Option : 3

Q.25 Three different positions of the same dice are shown. Select the letter/number that will be on the face opposite to the face having the letter 'U'.



- Ans ☐ 1. I
☒ 2. E
☐ 3. A
☐ 4. 9

Question ID : 81616113030

Status : Not Answered

Chosen Option : --

Section : General Awareness

Q.1 In which of the following states is the Rowa Wildlife Sanctuary

situated? Ans ☒ 1. Tripura

☒ 2. Haryana

☒ 3. Punjab

☒ 4. Assam

Question ID : **81616113044**

Status : **Answered**

Chosen Option : **1**

Q.2 Veer Surendra Sai was a freedom fighter from:

Ans ☒ 1. Odisha

☒ 2. Telangana

☒ 3. Nagaland

☒ 4. Sikkim

Question ID : **81616114262**

Status : **Answered**

Chosen Option : **2**

Q.3 Who among the following persons was elected as the Vice President of Asia Pacific Broadcasting Union in December 2020?

Ans ☒ 1. Rakesh Mohan

☒ 2. Hemant Pandey

☒ 3. Bina Agarwal

☒ 4. Shashi Shekhar Vempati

Question ID : **81616113564**

Status : **Answered**

Chosen Option : **3**

Q.4 The Mysore Palace was the residence of the— _.

Ans ☒ 1. Palas

☒ 2. Wodeyars

☒ 3. Chandelas

☒ 4. Bundelas

Question ID : **81616114259**

Status : **Answered**

Chosen Option : **3**

Q.5 Pattachitra art form is dedicated to which Lord in Hindu

mythology? Ans ☒ 1. Lord Jagannath

☒ 2. Lord Ganesha

☒ 3. Lord Shiva

☒ 4. Lord Brahma

Question ID : **81616113036**

Status : **Answered**

Chosen Option : **3**

Q.6 In which of the following years was the Mughal empire established by

Babur? Ans ☒ 1. 1699

☒ 2. 1526

☒ 3. 1578

☒ 4. 1634

Question ID : **81616113554**

Status : **Answered**

Chosen Option : **2**

Q.7 Mizoram has started 'Love Brigade' scheme to fight against which of the following diseases in December 2020?

Ans ☒ 1. Syphilis

☒ 2. HIV/AIDS

☒ 3. Chlamydia

☒ 4. Gonorrhoea

Question ID : **81616113041**

Status : **Answered**

Chosen Option : **2**

Q.8 Lakshya Sen is associated with which of the following

sports? Ans ☒ 1. Table tennis

☒ 2. Basketball

☒ 3. Badminton

☒ 4. Lawn tennis

Question ID : **81616114268**

Status : **Answered**

Chosen Option : **4**

Q.9 Who among the following was appointed as the Chief Executive of the health insurance scheme 'Ayushman Bharat' by the National Health Authority in January 2021?

Ans ☒ 1. Rama Mohan Rao Amara

☒ 2. Anil Ladha

☒ 3. RS Sharma

☒ 4. Sanjeev Kumar

Question ID : 81616113563

Status : Answered

Chosen Option : 4

Q.10 With which of the following sports is Rula Gold Cup

associated? Ans ☒ 1. Bridge

☒ 2. Water polo

☒ 3. Badminton

☒ 4. Swimming

Question ID : 81616113560

Status : Answered

Chosen Option : 3

Q.11 Who among the following was appointed as the Managing Director and Chief Executive Officer of SBI Cards and Payment Services Ltd. in January 2021?

Ans ☒ 1. Rajnish Kumar

☒ 2. Ashwini Kumar Tewari

☒ 3. Swaminathan Janakiraman

☒ 4. Rama Mohan Rao Amara

Question ID : 81616113038

Status : Answered

Chosen Option : 2

Q.12 Which of the following Articles of the Constitution of India states that there will be a Vice- President of India?

Ans ☒ 1. Article 75

☒ 2. Article 56

☒ 3. Article 45

☒ 4. Article 63

Question ID : 81616113053

Status : Answered

Chosen Option : 4

Q.13 With what do you divide thrust in a liquid to obtain the value of pressure? Ans  1. Mass

 2. Density

 3. Volume

 4. Area

Question ID : 81616114251

Status : **Answered**

Chosen Option : 3

Q.14 With which of the following countries did India sign an agreement in February 2021 for the construction of Lalandar (Shatoot) Dam?

Ans  1. Australia

 2. Japan

 3. Afghanistan

 4. Brazil

Question ID : 81616113562

Status : **Answered**

Chosen Option : 3

Q.15 Which of the following is NOT used to make

toothpaste? Ans  1. Galena

 2. Silica

 3. Limestone

 4. Aluminium Oxide

Question ID : 81616114254

Status : **Answered**

Chosen Option : 3

Q.16 A channel of canal where water is forced to flow against the slope of land by upliftment is called _.

Ans  1. Groundwater table

 2. Warabandi system

 3. Lift channel

 4. Flow channel

Question ID : 81616113550

Status : **Answered**

Chosen Option : 3

Q.17 An elastic wave generated by an impulse such as an earthquake or an explosion is called _____.

- Ans
- ☐ 1. tectonic shift
 - ☐ 2. epicentre
 - ☒ 3. seismic wave
 - ☐ 4. sound wave

Question ID : 81616113551

Status : Answered

Chosen Option : 3

Q.18 Who among the following was the founder of

- Homeopathy? Ans
- ☐ 1. FG Hopkins
 - ☐ 2. Selman Waksman
 - ☒ 3. Samuel Hahnemann
 - ☐ 4. Robert Koch

Question ID : 81616113548

Status : Answered

Chosen Option : 3

Q.19 Which of the following states launched the SAANS (Social Awareness and Action to Neutralise Pneumonia Successfully) campaign in February 2021?

- Ans
- ☐ 1. Uttar Pradesh
 - ☐ 2. Odisha
 - ☒ 3. Madhya Pradesh
 - ☐ 4. Sikkim

Question ID : 81616113545

Status : Answered

Chosen Option : 3

Q.20 Who among the following persons was announced as the brand ambassador for the BAFTA (British Academy of Film and Television Arts) 'Breakthrough Initiative' in November 2020?

- Ans
- ☐ 1. Akshay Kumar
 - ☒ 2. AR Rahman
 - ☐ 3. Ajay Devgan
 - ☐ 4. Kuldeep Handoo

Question ID : 81616113557

Status : Answered

Chosen Option : 3

Q.21 Who among the following wrote the novel 'Rangbhumi: The Arena of

Life'? Ans ☒ 1. Abanindranath Tagore

☒ 2. Mahatma Gandhi

☒ 3. Munshi Pemchand

☒ 4. Rabindranath Tagore

Question ID : 81616113556

Status : Answered

Chosen Option : 3

Q.22 Who among the following assassinated Sir William Hutt Curzon Wylie in

London? Ans ☒ 1. Sukhdev Thapar

☒ 2. Surya Sen

☒ 3. Madan Lal Dhingra

☒ 4. Khudiram Bose

Question ID : 81616113048

Status : Answered

Chosen Option : 4

Q.23 In which of the following temples will you find

Gopurams? Ans ☒ 1. Shiva Temple, Chidambaram

☒ 2. Bhabatarini Temple, Dakshineswar

☒ 3. Dilwara Temple, Mount Abu

☒ 4. Golden Temple, Amritsar

Question ID : 81616114247

Status : Answered

Chosen Option : 3

Q.24 Which of the following Acts introduced federal features and provincial autonomy in the legislature and also made provisions for the distribution of legislative powers between the Centre and the provinces?

Ans ☒ 1. The Government of India Act, 1858

☒ 2. The Government of India Act, 1919

☒ 3. The Government of India Act, 1935

☒ 4. Indian Councils Act, 1909

Question ID : 81616113559

Status : Answered

Chosen Option : 4

Q.25 Where is the corporate office of RBL Bank

located? Ans  1. Srinagar

 2. Patna

 3. Mumbai

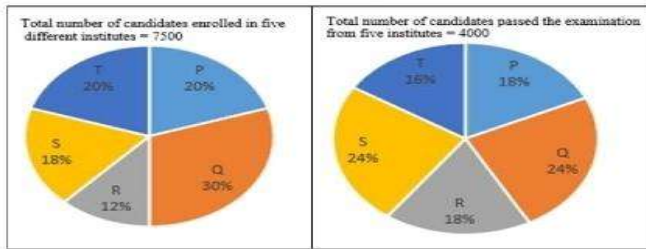
 4. Bengaluru

Question ID : **81616113542**

Status : **Answered**

Chosen Option : **3**

The following pie charts represent the distribution of candidates who were enrolled for a competitive examination, and the candidates (out of those enrolled) who passed the exam from five different institutes P, Q, R, S and T.



What is the ratio of the total number of candidates enrolled in institutes Q, R and S together, to the number of candidates passed from the institutes Q, R and S together?

- ☒ 75 : 44
- ☒ 71 : 55
- ☒ 44 : 75

Radha saves 25% of her income. If her expenditure increases by 20% and her income increases by 29%, then her savings increase by :

- ☒ 56%
- ☒ 70%
- ☒ 52%
- ☒ 65%

Surbhi sold an article for 2176 after giving 12% discount on its marked price. Had she not given any discount, she would have earned a profit of 25%. What is the cost price (in ₹) of the article?

- ☒ 160
- ☒ 165
- ☒ 150
- ☒ 145

in $\triangle ABC$, D and E are the points on sides AB and AC, respectively such that $\angle ADE = \angle B$. If AD = 7 cm, BD = 5 cm and BC = 9 cm, then DE (in cm) is equal to:

- ☒ 5.25
- ☒ 10
- ☒ 7
- ☒ 6.75

Q.5 The value of

$$\frac{2\sin' 3D^{\circ}\tan' 6D^{\circ}-3\cos' 6D^{\circ}\sec' 30'}{4\cot' 4S^{\circ}-\sec' 60'+\sin' 60^{\circ}+\cos' 90^{\circ}}''$$

✗ $\frac{1}{3}(\sqrt{3}-2)$

✗ $2(\sqrt{3}+2)$

✓ $2(\sqrt{3}-2)$

✗ $\frac{1}{3}(\sqrt{3}+2)$

If a five digit number 247xy is divisible by 3, 7 and 11, then what is the value of(2y-8x)?

✗ 17

The ratio of two numbers A and B is 5 : 8. If 5 is added to each ofA and B, then the ratio ofA and B becomes 2 : 3. The sum ofA and B is:

✗ 78

✗ 4z

If length of a rectangle is increased to its three times and breadth is decreased to its half, then the ratio of the area of given rectangle to the area of new rectangle is:

W J:3

W 3:2

W 3: I

W 2:3

Q.9 The value of $3 \div 18$ of $3 \times 6 - 22 \times 6 \div 18 - 3 \div 2 + 10 - 3 \div 9$ of 3×9 is:

- Ans  1. $\frac{1}{3}$
2. $-\frac{1}{3}$
3. $-\frac{1}{2}$
4. $\frac{1}{2}$

Question ID : 81616113566

Status : Answered

Chosen Option : 4

Q.10 If $x - y = 11$ and $\frac{1}{x} - \frac{1}{y} = \frac{11}{24}$, then what is the value of $x^3 - y^3 + x^2y^2$?

- Ans  1. 1115
2. 1331
3. 1105
4. 1307

Question ID : 81616114284

Status : Answered

Chosen Option : 3

Find the value of $\frac{8 \sin 30^\circ \sin^2 60^\circ - 4 \sin 90^\circ - \sec^2 45^\circ}{\tan^2 45^\circ - \cot^2 30^\circ}$

Q.11

$\frac{5}{2}$

Ans  1.

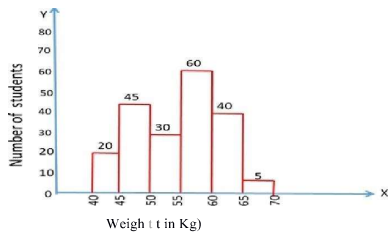
2. $-\frac{1}{2}$
3. $\frac{3}{4}$
4. $\frac{3}{2}$

Question ID : 81616112878

Status : Answered

Chosen Option : 1

Q.12 The histogram shows the weights of students of class X in a school.



Let x be the number of students whose weight is less than 50 kg and y be the number of the students whose weight is greater than or equal to 60 kg. What is the value of $x : y$?

K 11 : 13

K 9 : 13

In a triangle ABC $AB : AC = 5 : 2$, $BC = 9$ cm. BA is produced to D, and the bisector of the Angle CAD meets BC produced at E. What is the length (in cm) of CE?

X 10

If $2 \cos^2 \theta = 3 \sin \theta$, $0^\circ < \theta < 90^\circ$, then the value of $(\sec^2 \theta - \tan^2 \theta + \cos \theta)$ is:

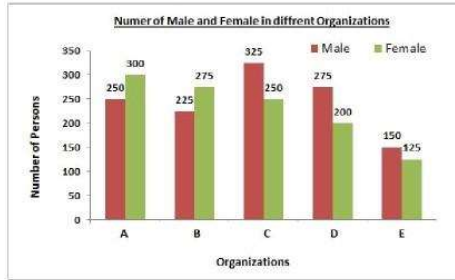
☒ $\frac{7}{4}$

☐ 4

☐ 4

☐ 4

Q.15 Number of male and female members in different organizations A, B, C, D and E are given in the bar graph.



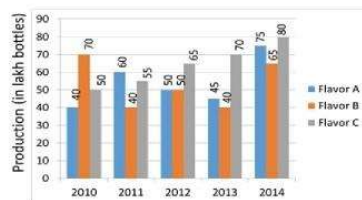
What is the ratio of average number of females in all the five organizations to the average number of males in all the five organizations?

- ☐ 49 : 46
- ☐ 51 : 49
- ☐ 49 : 51
- ☒ 46 : 49

The rate of simple interest for first two years is 8% p.a., for the next 4 years, it is 10% p.a. and for the period beyond 6 years, it is 12% p.a. If a person get 1.60 as simple interest after 9 years, then how much money (in ₹) did he invest?

- ☐ 19674
- ☐ zoog7
- ☒ 199ññ
- ☐ 2107.5

Cough syrup of three different flavors - A, B and C (in lakh bottles) manufactured by a medicine company over a period of five years from 2010 to 2014 has been shown in the bar graph.



The ratio of the average production of all flavors in 2012 to the difference of the average production of flavor A in 2012, 2013 and 2014 and the average production of flavor C in 2012, 2013 and 2014 is :

- ☐ 15 : 26
- ☐ 3 : 11
- ☒ 11 : 3
- ☐ 26 : 15

Q.18 Eighteen persons working 8 hours a day can complete 3 units of work in 10 days. How many days are required by 25 persons to complete 5 units of work working 6 hours a day?

- Ans**
- 1. 10
 - 2. 20
 - ✓ 3. 16
 - 4. 12

Question ID : 81616113068

Status : **Answered**

Chosen Option : 3

Q.19 In a circle with centre O, AD is a diameter and AC is a chord. Point B is on AC such that $OB = 7$ cm and $\angle OBA = 60^\circ$. If $\angle DOC = 60^\circ$, then what is the length of BC (in cm)?

- Ans**
- 1. 3.5
 - 2. 9
 - ✓ 3. 7
 - 4. 5

Question ID : 81616113579

Status : **Answered**

Chosen Option : 3

Q.20 In a class of 90 students 60% are girls and remaining are boys. Average marks of boys are 63 and that of girls are 70. What are the average marks of the whole class?

- Ans**
- 1. 58.9
 - 2. 65.3
 - ✓ 3. 67.2
 - 4. 66.7

Question ID : 81616113567

Status : **Answered**

Chosen Option : 3

Q.21 If $x - \frac{1}{x} = 5$, $x \neq 0$, then what is the value of $\frac{x^6 - 5x^3 - 1}{x^6 + 7x^3 - 1}$?

- Ans**
- ✗ 1. $\frac{49}{45}$
 - 2. $\frac{45}{41}$
 - 3. $\frac{45}{49}$
 - 4. $\frac{41}{45}$

Question ID : 81616113073

Status : **Answered**

Chosen Option : 3

Q.22 A 240 m long train overtakes a man walking at 6 km/h, in the same direction, in 9 seconds. How much time (in seconds) will it take to pass a 372 m long tunnel with the same speed?

- Ans
- ☒ 1. 20
 - ☒ 2. 21.6
 - ☒ 3. 18
 - ☒ 4. 20.4

A shopkeeper sold two articles for ₹10591 each. On one he gained 19% and on the other he lost 11%. What was his overall gain or loss percent (correct to one decimal place)?

Question ID : 81616114281

Status : Answered

Chosen Option : 3

Q.23

- Ans
- ☒ 1. Profit 1.8%
 - ☒ 2. Loss 2.7%
 - ☒ 3. Loss 10%
 - ☒ 4. Profit 5%

Question ID : 81616113570

Status : Answered

Chosen Option : 3

Q.24 ABCD is a cyclic quadrilateral. Diagonals BD and AC intersect each other at E. If $\angle BEC = 138^\circ$ and $\angle ECD = 35^\circ$, then what is the measure of $\angle BAC$?

- Ans
- ☒ 1. 133°
 - ☒ 2. 123°
 - ☒ 3. 113°
 - ☒ 4. 103°

Question ID : 81616113075

Status : Answered

Chosen Option : 3

Q.25 If $16x^2 + y^2 = 48$ and $xy = 2$, $x, y > 0$, then the value of $(64x^3 + y^3)$ is:

- Ans
- ☒ 1. 340
 - ☒ 2. 240
 - ☒ 3. 320
 - ☒ 4. 300

Question ID : 81616113576

Status : Not Answered

Chosen Option : --

Section : English Comprehension

Q.1 Select the most appropriate synonym of the given word.

Prompt

- Ans** ☒ 1. Gradual
- ☒ 2. Quick
- ☒ 3. Slow
- ☒ 4. Lengthy

Question ID : **81616113605**

Status : **Answered**

Chosen Option : **2**

Q.2 Select the INCORRECTLY spelt

- word. Ans** ☒ 1. Sincere
- ☒ 2. Grievance
- ☒ 3. Liesure
- ☒ 4. Seize

Question ID : **81616113613**

Status : **Answered**

Chosen Option : **3**

Q.3 Select the INCORRECTLY spelt

- word. Ans** ☒ 1. Borrow
- ☒ 2. Alottment
- ☒ 3. Terrorism
- ☒ 4. Allowance

Question ID : **81616113612**

Status : **Answered**

Chosen Option : **2**

Q.4 Select the most appropriate ANTONYM of the given word.

Hope

- Ans** ☒ 1. Chance
- ☒ 2. Courage
- ☒ 3. Doubt
- ☒ 4. Optimism

Question ID : **81616113606**

Status : **Answered**

Chosen Option : **3**

Q.5 Select the option that can be used as a one-word substitute for the given group of words.

A self-governing country or

region Ans ☒ 1. Democracy

☒ 2. Monarchy

☒ 3. Autonomy

☒ 4. Anarchy

Question ID : 81616113105

Status : **Answered**

Chosen Option : 1

Q.6 Select the option that expresses the given sentence in reported speech.

"Is he alright now?" I asked my neighbour's wife about her husband, Mr.

Gulyani. Ans ☒ 1. I asked Mrs. Gulyani, my neighbour's wife, if her husband was alright then.

☒ 2. I asked Mrs. Gulyani, my neighbour's wife, if your husband will be alright now.

☒ 3. I asked Mrs. Gulyani, my neighbour's wife, if her husband had become alright then.

☒ 4. I asked Mrs. Gulyani, my neighbour's wife, if her husband is alright now.

Question ID : 81616113593

Status : **Answered**

Chosen Option : 1

Q.7 Select the option that expresses the given sentence in passive voice.

The sunrays burned my face.

Ans ☒ 1. My face is burned by the sunrays.

☒ 2. My face has been burned by the sunrays.

☒ 3. My face is being burned by the sunrays.

☒ 4. My face was burned by the sunrays.

Question ID : 81616113087

Status : **Answered**

Chosen Option : 4

Q.8 Select the option that can be used as a one-word substitute for the given group of words.

A place where coins, medals or tokens are

made Ans ☒ 1. Mint

☒ 2. Casting

☒ 3. Mill

☒ 4. Workshop

Question ID : 81616113106

Status : **Answered**

Chosen Option : 1

Q.9 The following sentence has been split into four segments. Identify the segment that contains a grammatical error.

The woodcutter felled / some trees / with hardly / many effort at all.

- Ans ☒ 1. many effort at all
- ☐ 2. some trees
- ☐ 3. with hardly
- ☐ 4. The woodcutter felled

Question ID : 81616113086

Status : Answered

Chosen Option : 1

Q.10 Select the most appropriate meaning of the following idiom.

To take a chill pill

- Ans ☐ 1. To gulp a tablet for a cold
- ☐ 2. To drink cold water
- ☒ 3. To calm down
- ☐ 4. To ask a doctor for medication

Question ID : 81616114316

Status : Answered

Chosen Option : 3

Q.11 Select the most appropriate ANTONYM of the given word.

Putrefy

- Ans ☐ 1. Destroy
- ☐ 2. Contaminate
- ☒ 3. Combine
- ☐ 4. Decompose

Question ID : 81616114314

Status : Answered

Chosen Option : 3

Q.12 Select the option that will improve the underlined part of the given sentence. In case no improvement is needed select 'No Improvement required'.

Fierce competition against restaurants has driven up the prices.

- Ans ☐ 1. along
- ☐ 2. No improvement required
- ☒ 3. among
- ☐ 4. through





Question ID : 81616113089

Status : Answered

Chosen Option : 3

Q.13 Select the most appropriate option to substitute the underlined segment in the given sentence. If no substitution is required, select 'No substitution required'.

"Can you give me so many examples of subordinate clauses?", the teacher asked the class.

- Ans  1. No substitution required
-  2. some many examples of
-  3. some few examples of
-  4. some more examples of





Question ID : 81616113595

Status : Answered

Chosen Option : 4

Q.14 The following sentence has been divided into parts. One of them may contain an error. Select the part that contains the error from the given options. If you don't find any error, mark 'No error' in your answer.

The river appears to have / got its name / from the town nearby.

- Ans  1. got its name
-  2. from the town nearby
-  3. No error
-  4. The river appears to have

Question ID : 81616114297

Status : Answered

Chosen Option : 1

Q.15 Sentences of a paragraph are given below in jumbled order. Arrange the sentences in the right order to form a meaningful and coherent paragraph.

- A. "Excellently well," said she; "we have everything that we want; I have but one prayer, that we may have a heavy storm of rain to water our plants."
B. A man who had two daughters married one to a gardener and the other to a potter.
C. Off he went to the potter's home and asked his other daughter how matters were with her.
D. After a while he paid a visit to the gardener's home and asked his daughter how she was, and how it fared with her.

Ans  1. ACDB

 2. DCAB

 3. BDAC

 4. BCDA

Question ID : 81616113602

Status : Answered

Chosen Option : 4

Q.16 Sentences of a paragraph are given below in jumbled order. Arrange the sentences in the right order to form a meaningful and coherent paragraph.

- A. While India is home to 75 per cent of the tigers in the world, the Global Tiger Day, as it is also known – sees awareness events organised in the country, as well as in neighbouring Bangladesh and Nepal.
B. Its primary objective is to preserve the natural habitat of the tiger.
C. International Tiger Day was initiated in 2010, at the Saint Petersburg Tiger Summit.
D. This annual event observed on 29 July, aims to create awareness on tiger conservation.

Ans  1. CDBA

 2. CABD

 3. DCBA

 4. BACD

Question ID : 81616114310

Status : Answered

Chosen Option : 1

Q.17 Select the most appropriate option to fill in the blank.

Help from relatives _____ him in difficult times.

Ans  1. approved

 2. supported

 3. allowed

 4. passed

Question ID : 81616113109

Status : Answered

Chosen Option : 2

Q.18 Select the most appropriate synonym of the given word.

Dedicated

- Ans ☒ 1. Tedious
- ☒ 2. Boring
- ☒ 3. Dreary
- ☒ 4. Committed

Question ID : 81616113604

Status : Answered

Chosen Option : 4

Q.19 Select the most appropriate meaning of the following idiom.

To walk on air

- Ans ☒ 1. To be completely free
- ☒ 2. To feel very depressed
- ☒ 3. To be very rich
- ☒ 4. To be very happy

Question ID : 81616114315

Status : Answered

Chosen Option : 1

Q.20 Select the most appropriate option to fill in the blank.

The interviewer asked Gautam, "Can you tell me what your— in life are?"

- Ans ☒ 1. frivolities
- ☒ 2. trivialities
- ☒ 3. determinations
- ☒ 4. aspirations

Question ID : 81616113615

Status : Answered

Chosen Option : 4

Comprehension:

In the following passage, some words have been deleted. Fill in the blanks with the help of the alternatives given. Select the most appropriate option for each blank.

Communication is a connection between people sharing information with (1) __other. It is important in everyday life, (2) __work and nearly any time you interact with other (3) __. Communication issues don't always happen (4) __of your English level. The truth is, you can know how to speak English (5) _____ knowing how to communicate in English.

SubQuestion No : 21**Q.21 Select the most appropriate option to fill in blank****number 1. Ans**  1. some 2. one 3. every 4. eachQuestion ID : **81616113597**Status : **Answered**Chosen Option : **4****Comprehension:**

In the following passage, some words have been deleted. Fill in the blanks with the help of the alternatives given. Select the most appropriate option for each blank.


Communication is a connection between people sharing information with (1) __other. It is important in everyday life, (2) __work and nearly any time you interact with other (3) __. Communication issues don't always happen (4) __of your English level. The truth is, you can know how to speak English (5) _____ knowing how to communicate in English.

SubQuestion No : 22**Q.22 Select the most appropriate option to fill in blank****number 2. Ans**  1. from 2. at 3. while 4. onQuestion ID : **81616113598**Status : **Answered**Chosen Option : **2**

Comprehension:

In the following passage, some words have been deleted. Fill in the blanks with the help of the alternatives given. Select the most appropriate option for each blank.

Communication is a connection between people sharing information with (1) __other. It is important in everyday life, (2) __work and nearly any time you interact with other (3) __. Communication issues don't always happen (4) __of your English level. The truth is, you can know how to speak English (5) _____ knowing how to communicate in English.

SubQuestion No : 23**Q.23 Select the most appropriate option to fill in blank****number 3. Ans**  1. people 2. animals 3. ones 4. creaturesQuestion ID : **81616113599**Status : **Answered**Chosen Option : **1****Comprehension:**

In the following passage, some words have been deleted. Fill in the blanks with the help of the alternatives given. Select the most appropriate option for each blank.

Communication is a connection between people sharing information with (1) __other. It is important in everyday life, (2) __work and nearly any time you interact with other (3) __. Communication issues don't always happen (4) __of your English level. The truth is, you can know how to speak English (5) _____ knowing how to communicate in English.

SubQuestion No : 24**Q.24 Select the most appropriate option to fill in blank****number 4. Ans**  1. because 2. since 3. about 4. besideQuestion ID : **81616113600**Status : **Answered**Chosen Option : **1**

Comprehension:

In the following passage, some words have been deleted. Fill in the blanks with the help of the alternatives given. Select the most appropriate option for each blank.

Communication is a connection between people sharing information with (1)___other. It is important in everyday life, (2)___work and nearly any time you interact with other (3)___ . Communication issues don't always happen (4)___of your English level. The truth is, you can know how to speak English (5)_____knowing how to communicate in English.

SubQuestion No : 25

Q.25 Select the most appropriate option to fill in blank

number 5. Ans  1. without

 2. minus

 3. devoid

 4. lacking

Question ID : **81616113601**

Status : **Answered**

Chosen Option : **1**

