

Click to Print logout

Challenges



REGISTRATION NUMBER :
EXAM DATE : 7-July-2017
EXAM NAME : SSC Examination
TOTAL MARKS : 200

C
a
n
d
i
d
a
t
e

A
n
s
w
e
r
:

A
L
C
Y

QID : 1 - In the following question, select the related word from the given alternatives.

Pen : Write :: ? : ?

न नलखत 9न म दए गए वकप मे से संबधत श द को चुनए।

कलम : िलखना :: ? : ?

Options:

1) Erase : Rubber

मटाना : रबर

2) Cup : Liquid

कप : तरल

3) Pencil : Wood

पेसल : लकड़ी

4) Knife : Cut

चाकू : काटना

Correct Answer: Knife : Cut

चाकू : काटना

Candidate Answer: Knife : Cut

चाकू : काटना

QID : 2 - In the following question, select the related word from the given alternatives.

Create : Destroy :: ? : ?

न नलखत 9न म दए गए वकप मे से संबधत श द को चुनए।

बनाना : तोड़ना :: ? : ?

Options:

1) Thin : Small

पतला : छोटा

2) Long : Short

ल बा : छोटा

3) Fat : Huge

मोटा : बड़ा

4) Long : Topmost

ल बा : सबसे ऊपर

Correct Answer: Long : Short

ल बा : छोटा

Candidate Answer: Long : Short

ल बा : छोटा

QID : 3 - In the following question, select the related letters from the given alternatives.

SNOP : ONSP :: CLAY : ?

न नलखत 9न म दए गए वकप म से संबधत अ र को चुनए।

SNOP : ONSP :: CLAY : ?

Options:

1) ALCY

2) LCYA

3) LYCA

4) ACLY

Correct Answer: ALCY

CANDIDATE NAME :

**EXAM START TIME : 10:00:00 EXAM DURATION : 02:00 Hrs TOTAL NO OF
QUESTIONS : 200**

QID : 4 - In the following question, select the related letters from the given alternatives.

PAN : TDM :: ? : ?

न नलखत 9न म दए गए वकाप म से संबंधत अ र को चुनए।

PAN : TDM :: ? : ?

Options:

- 1) GIL : KMG
- 2) HOT : KLG
- 3) MAN : PAM
- 4) SIP : WLO

Correct Answer: SIP : WLO

Candidate Answer: SIP : WLO

QID : 5 - In the following question, select the related number from the given alternatives.

23 : 72 :: 38 : ?

न नलखत 9न म दए गए वकाप म से संबंधत सं या को चुनए।

23 : 72 :: 38 : ?

Options:

- 1) 110
- 2) 117
- 3) 123
- 4) 112

Correct Answer: 117

Candidate Answer: 117

QID : 6 - In the following question, select the related number from the given alternatives.

62 : 145 :: ? : ?

न नलखत 9न म दए गए वकाप म से संबंधत सं या को चुनए।

62 : 145 :: ? : ?

Options:

- 1) 79 : 168
- 2) 119 : 226
- 3) 167 : 291
- 4) 34 : 122

Correct Answer: 119 : 226

Candidate Answer: [NOT ANSWERED]

QID : 7 - In the following question, select the odd word from the given alternatives.

न नलखत 9न म दए गए वकाप म से वषम श द को चुनए।

Options:

- 1) Sea
समुड
- 2) River
नदक
- 3) Ocean
महासागर
- 4) Swimming Pool
तरणताल

Correct Answer: Swimming Pool

तरणताल

Candidate Answer: River

नदक

QID : 8 - In the following question, select the odd word from the given alternatives.

न नलखत 9न म दए गए वकाप म से वषम श द को चुनए।

Options:

1) Red

लाल

2) White

सफेद

3) Blue

नीला

4) Yellow

पीला

Correct Answer: White

सफेद

Candidate Answer: White

सफेद

QID : 9 - In the following question, select the odd letters from the given alternatives.

निम्नलिखित 9न म दए गए विकल्प म से विषम अर को चुनए।

Options:

1) NQTW

2) PSVZ

3) WZCF

4) BEHK

Correct Answer: PSVZ**Candidate Answer:** PSVZ**QID : 10** - In the following question, select the odd letters from the given alternatives.

निम्नलिखित 9न म दए गए विकल्प म से विषम अर को चुनए।

Options:

1) XTCC

2) NJMQ

3) EAUZ

4) SOHL

Correct Answer: EAUZ**Candidate Answer:** EAUZ**QID : 11** - In the following question, select the odd number from the given alternatives.

निम्नलिखित 9न म दए गए विकल्प म से विषम सं या को चुनए।

Options:

1) 61

2) 51

3) 97

4) 89

Correct Answer: 51**Candidate Answer:** 51**QID : 12** - In the following question, select the odd number pair from the given alternatives.

निम्नलिखित 9न म दए गए विकल्प म से विषम सं या यु म को चुनए।

Options:

1) 13 – 2028

2) 11 – 1210

3) 7 – 336

4) 9 – 648

Correct Answer: 7 – 336**Candidate Answer:** 7 – 336

QID : 13 - Arrange the given words in the sequence in which they occur in the dictionary.

1. Mobile
2. Mandate
3. Mandarin
4. Monkey
5. Master

ननलखत शद को शदकोशम आने वाले म के अनुसार फलख।

1. Mobile
2. Mandate
3. Mandarin
4. Monkey
5. Master

Options:

- 1) 32514
- 2) 31254
- 3) 35241
- 4) 35214

Correct Answer: 32514

Candidate Answer: 32514

QID : 14 - Arrange the given words in the sequence in which they occur in the dictionary.

1. Drink
2. Drinking
3. Drive
4. Dictionary
5. Dracula

ननलखत शद को शदकोशम आने वाले म के अनुसार फलख।

1. Drink
2. Drinking
3. Drive
4. Dictionary
5. Dracula

Options:

- 1) 45123
- 2) 41532
- 3) 42513
- 4) 45213

Correct Answer: 45123

Candidate Answer: 45123

QID : 15 - In the following question, which one set of letters when sequentially placed at the gaps in the given letter series shall complete it?

_ ml _ nl _ mlm _ l _ mlmn _

ननलखत 9न म अ र का कौन सा समूह खालक थान पर मवार रखने से दक गई अ र ूंखला को पूरा करेगा?

_ ml _ nl _ mlm _ l _ mlmn _

Options:

- 1) nmmll
- 2) nmlnml
- 3) mnlmlm
- 4) nmnnnl

Correct Answer: nmnnnl

Candidate Answer: nmnnnl

QID : 16 - A series is given with one term missing. Select the correct alternative from the given ones that will complete the series.

FGC, HHA, JIY, ?

एक अनु म ददया गया है, िजसम से एक पद लु त है। ददए गए फ्वकाप म से वह सहक फ्वकाप चुनए, जो अनु म को पूरा करे।

FGC, HHA, JIY, ?

Options:

- 1) KKW
- 2) LJW
- 3) LKX
- 4) KJX

Correct Answer: LJW

Candidate Answer: LJW

QID : 17 - In the following question, select the missing number from the given series.

2, 6, 4, 9, 8, 13, 16, 18, 32, ?

निम्नलिखित श्रृंखला में दिए गए क्रम में से लुप्त अंक का चयन कीजिए।

2, 6, 4, 9, 8, 13, 16, 18, 32, ?

Options:

- 1) 24
- 2) 26
- 3) 22
- 4) 28

Correct Answer: 24

Candidate Answer: 24

QID : 18 - In the following question, select the missing number from the given series.

534, 543, 559, 584, 620, ?

निम्नलिखित श्रृंखला में दिए गए क्रम में से लुप्त अंक का चयन कीजिए।

534, 543, 559, 584, 620, ?

Options:

- 1) 648
- 2) 676
- 3) 669
- 4) 671

Correct Answer: 669

Candidate Answer: 669

QID : 19 - The ratio of present ages of Sumit and Amit is 3 : 4. If the age of Sumit 20 years hence will be 62 years, then what is the present age (in years) of Amit?

सुमित तथा अमित का वर्तमान आयु का अनुपात 3 : 4 है। यदि 20 वर्षों पश्चात् सुमित का आयु 62 वर्ष होगी, तो अमित का वर्तमान आयु (वर्षों में) क्या है? **Options:**

Options:

- 1) 56
- 2) 64
- 3) 60
- 4) 52

Correct Answer: 56

Candidate Answer: 56

QID : 20 - In a line of boys Aman is 12th from top and Baman is 18th from bottom. If there are 6 boys between Aman and Baman, then how many maximum boys are there in the row?

लड़कों की एक पंक्ति में अमन ऊपर से 12 वंथान तथा बमन नीचे से 18 वंथान पर है। यदि अमन तथा बमन के मध्य में 6 लड़के हों, तो पंक्ति में अधिकतम कितने लड़के हों? **Options:**

Options:

- 1) 34
- 2) 36
- 3) 35
- 4) 37

Correct Answer: 36

Candidate Answer: 36

QID : 21 - 6 boys P, Q, R, S, T and U are standing in a row facing north. P and Q cannot be either at 1st or 2nd place. R and S will always be together and R must be at one of the ends. R doesn't have S to his right. Who is standing on the west end?

6 लड़के P, Q, R, S, T तथा U एक पंक्ति में उत्तर की ओर मुख करके खड़े हैं। P तथा Q पहले या दूसरे स्थान पर नहीं हैं। R तथा S हमेशा साथ हैं तथा R एक छोर पर है। R के दायाँ S नहीं हैं। पश्चिमी छोर पर कौन खड़ा है?

Options:

- 1) S
2) S or U
S या U
3) T

- 4) T or U
T या U

Correct Answer: T or U

T या U

Candidate Answer: T or U

T या U

QID : 22 - In the following question, select the word which cannot be formed using the letters of the given word.**BLENDING**

निम्नलिखित विकल्पों में से वह शब्द चुनिए जो दिए गए शब्द के अक्षरों का योग करके नहीं बनाया जा सकता।

BLENDING**Options:**

- 1) BLEND
2) BALD
3) LEND
4) BINGE

Correct Answer: BALD**Candidate Answer:** BALD**QID : 23** - In the following question, select the word which cannot be formed using the letters of the given word.**TRADITIONAL**

निम्नलिखित विकल्पों में से वह शब्द चुनिए जो दिए गए शब्द के अक्षरों का योग करके नहीं बनाया जा सकता।

TRADITIONAL**Options:**

- 1) NATIONAL
2) TRAIN
3) LAND
4) RATION

Correct Answer: NATIONAL**Candidate Answer:** NATIONAL**QID : 24** - In a certain code language, "UPDATE" is written as "FRWCRY" and "GREATS" is written as "GTIQRY". How is "BLENDY" written in that code language?एक कूटभाषा में, "UPDATE" को "FRWCRY" लिखा जाता है तथा "GREATS" को "GTIQRY" लिखा जाता है। इस कूटभाषा में "BLENDY" को किस प्रकार लिखा जाएगा? **Options:**

- 1) DMGWBL
2) CJZAFP
3) ZJCPFA
4) GNDWBL

Correct Answer: GNDWBL**Candidate Answer:** CJZAFP**QID : 25** - In a certain code language, "FRAME" is written as "OUGVH" and "STONY" is written as "IVUXU". How is "RESTS" written in that code language?एक कूटभाषा में, "FRAME" को "OUGVH" लिखा जाता है तथा "STONY" को "IVUXU" लिखा जाता है। इस कूटभाषा में "RESTS" को किस प्रकार लिखा जाएगा? **Options:**

- 1) CBYIT
2) ABDHS
3) EAZHS
4) EAZIT

Correct Answer: CBYIT

andidate Answer: CBYIT

QID : 26 - If "+" denotes "multiplied by", "-" denotes "added to", "x" denotes "divided by" and "÷" denotes "subtracted from", then which of the following equation is true?

यदि "+" का अर्थ "गुणा" है, "-" का अर्थ "जोड़" है, "x" का अर्थ "भाग" है तथा "÷" का अर्थ "घटाव" है, तो निम्नलिखित में से कौन सा समीकरण सही है? **Options:**

- 1) $30 \div 8 \times 4 - 6 + 1 = 32$
- 2) $8 + 5 - 20 \times 4 \div 6 = 41$
- 3) $12 - 12 \div 6 \times 6 + 3 = 21$
- 4) $6 + 7 \times 3 - 4 \div 6 = 26$

Correct Answer: $12 - 12 \div 6 \times 6 + 3 = 21$

Candidate Answer: $12 - 12 \div 6 \times 6 + 3 = 21$

QID : 27 - In the following question, by using which mathematical operators will the expression become correct?

35 ? 5 ? 10 ? 15 ? 4

निम्नलिखित में से कौन से गणितीय संकेतों का योग करने से दिया गया समीकरण सही हो जाएगा?

35 ? 5 ? 10 ? 15 ? 4

Options:

- 1) ÷, +, = and ×
- 2) ×, ÷, > and ×
- 3) ÷, ×, > and ×
- 4) ÷, ×, < and +

Correct Answer: ÷, ×, > and ×

÷, ×, > तथा ×

Candidate Answer: ÷, ×, > and ×

÷, ×, > तथा ×

QID : 28 - If $34 \times 15 = 495$ and $43 \times 12 = 504$, then $98 \times 17 = ?$

यदि $34 \times 15 = 495$ तथा $43 \times 12 = 504$, हो, तो $98 \times 17 = ?$

Options:

- 1) 1649
- 2) 1683
- 3) 1763
- 4) 1751

Correct Answer: 1649

Candidate Answer: 1649

QID : 29 - If $26 (52) 8$ and $48 (192) 16$, then what is the value of 'A' in $A (175) 14$?

यदि $26 (52) 8$ तथा $48 (192) 16$ हो, तो $A (175) 14$ में, 'A' का मान क्या है? **Options:**

- 1) 50
- 2) 25
- 3) 35
- 4) 40

Correct Answer: 50

Candidate Answer: 50

QID : 30 -



Options:

- 1) 152
- 2) 184
- 3) 166
- 4) 162

Correct Answer: 166

Candidate Answer: [NOT ANSWERED]

QID : 31 -

In the following question, select the number which can be placed at the sign of question mark (?) from the given alternatives.

निम्नलिखित प्रश्न में दिए गए विकल्पों में से प्रश्न चिन्ह (?) के स्थान पर आने वाली संख्या को चुनिए।

4	5	6	125
8	9	7	513
11	?	6	536

Options:

- 1) 7
- 2) 10
- 3) 9
- 4) 8

Correct Answer: 8

Candidate Answer: 8

QID : 32 -



Options:

- 1) 60
- 2) 40
- 3) 80
- 4) 76

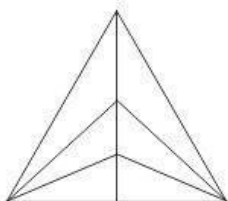
Correct Answer: 60

Candidate Answer: 60

QID : 33 -

How many triangles are there in the given figure?

दी गई आकृति में कितने त्रिभुज हैं?



Options:

1) 13

2) 14

3) 12

4) 15

Correct Answer: 15**Candidate Answer:** 15

QID : 34 - In each of the following question below are given some statements followed by some conclusions. Taking the given statements to be true even if they seem to be at variance from commonly known facts, read all the conclusions and then decide which of the given conclusion logically follows the given statements.

Statements:

I. All grapes are green.

II. Some green are hard.

Conclusions:

I. Some green are grapes.

II. Some hard are grapes.

III. No grape is hard.

नीचे दए गए येक 9न म कु छ कथन और उनके बाद उन कथन पर आधा रत कु छ न कष दए गए ह, हालांकि उनम सामा य ात तऱय से नभ नता हो सकती है। सभी न कष पढ़ और नफर नधा रत कर नक दए गए कौन से न कष, दए गए कथन के आधार पर युऱतसंगत ह।

कथन:

I. सभी अंगूर हरे ह।

II. कु छ हरे स त ह।

न कषः

I. कु छ हरे अंगूर ह।

II. कु छ स त अंगूर ह।

III. कोई अंगूर स त नहकं ह।

Options:

1) Only conclusion (I) follows

के वल न कष (I) सहक है

2) Only conclusion (I) and (II) follow

के वल न कष (I) तथा (II) सहक ह

3) Only conclusion (I) and (III) follow

के वल न कष (I) तथा (III) सहक ह

4) All conclusions follow

सभी न कष सहक ह

Correct Answer: Only conclusion (I) follows

के वल न कष (I) सहक है

Candidate Answer: Only conclusion (I) follows

के वल न कष (I) सहक है

QID : 35 - In each of the following question below are given some statements followed by some conclusions. Taking the given statements to be true even if they seem to be at variance from commonly known facts, read all the conclusions and then decide which of the given conclusion logically follows the given statements.

Statements:

- I. All cars are black
II. No black is shining.

Conclusions:

- I. Some cars are shining.
II. No car is shining.
III. No shining is car.

नीचे दए गए येक 9न म कु छ कथन और उनके बाद उन कथन पर आधा रत कु छ न कष दए गए ह, हालांकि उनम सामा य ात ताय से नभ नता हो सकती है। सभी न कष पढ़ और फर नधा रत कर फक दए गए कौन से न कष, दए गए कथन के आधार पर युिरतसंगत ह।

कथन:

- I. सभी गाड़ियाँ कालक ह।
II. कोई काला चमक ला नहकं ह।

िन कषः

- I. कु छ गाड़ियाँ चमक लक ह।
II. कोई गाड़ी चमक लक नहकं है।
III. कोई चमक लक गाड़ी नहकं है।

Options:

- 1) Only conclusion (I) and (II) follow
के वल न कष (I) तथा (II) सहक ह
2) Only conclusion (II) and (III) follow
के वल न कष (II) तथा (III) सहक ह
3) Only conclusion (I) and (III) follow
के वल न कष (I) तथा (III) सहक ह
4) All conclusions follow
सभी न कष सहक ह

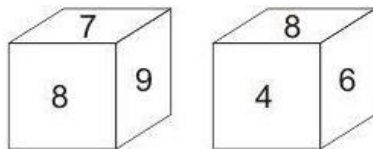
Correct Answer: Only conclusion (II) and (III) follow
के वल न कष (II) तथा (III) सहक ह

Candidate Answer: Only conclusion (II) and (III) follow
के वल न कष (II) तथा (III) सहक ह

QID : 36 -

Two position of a cube are shown below.
What will come opposite to face containing '9'?

नीचे एक घन की दो अवस्थाएँ दर्शायी गयी हैं।
'9' युक्त फलक के विपरीत क्या आयेगा?

**Options:**

- 1) 7
2) 4
3) 6
4) 4 or 6
4 अथवा 6

Correct Answer: 4

Candidate Answer: 4

QID : 37 -



Options:

1) γ

2) θ

3) δ

4) γ or δ γ

अथवा δ

Correct Answer: γ

Candidate Answer: γ

QID : 38 -



Options:

1) h

2) g

3) f

4) k

Correct Answer: f

Candidate Answer: f

QID : 39 - Identify the diagram that best represents the relationship among the given classes.

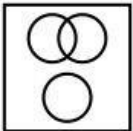
Tree, Branches, Root

वह आरेख चुनिए जो नीचे दिए गए वर्गों के बीच के संबंध का सही रूप

करता है। पेड़, शाखाएं, जड़

Options:

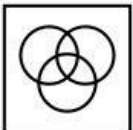
1)



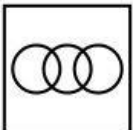
2)



3)



4)



Correct Answer:



Candidate Answer:



QID : 40 - Identify the diagram that best represents the relationship among the given classes.

Shirt, Trouser, Clothes

वह आरेख चुनिए जो नीचे दिए गए वर्गों के बीच के संबंध का सही रूप

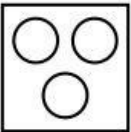
करता है। **कमीज़, पतलून, कपड़े**

Options:

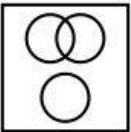
1)



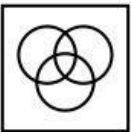
2)



3)



4)



Correct Answer:




Candidate Answer:



QID : 41 -


Which answer figure will complete the pattern in the question figure?

कौन सी उत्तर आकृति प्रश्न आकृति के प्रतिरूप को पूरा करेगी?




Options:

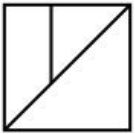
1)



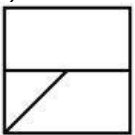
2)




3)




4)



Correct Answer:




Candidate Answer:



QID : 42 -


Which answer figure will complete the pattern in the question figure?

कौन सी उत्तर आकृति प्रश्न आकृति के प्रतिरूप को पूरा करेगी?

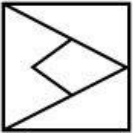


Options:


1)




2)




3)




4)



Correct Answer:



Candidate Answer:



QID : 43 -

From the given answer figure, select the one in which the question figure is hidden/embedded.

दी गई उत्तर आकृतियों में से उस उत्तर आकृति को चलिए जिस में प्रश्न आकृति निहित है।

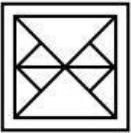


Options:

1)




2)



3)



4)



Correct Answer:



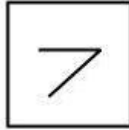
Candidate Answer:



QID : 44 -


From the given answer figure, select the one in which the question figure is hidden/embedded.

दी गई उत्तर आकृतियों में से उस उत्तर आकृति को चुनिए जिस में प्रश्न आकृति निहित है।

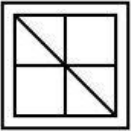


Options:


1)



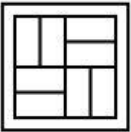
2)



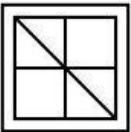
3)



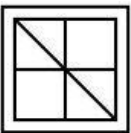
4)



Correct Answer:



Candidate Answer:



QID : 45 -

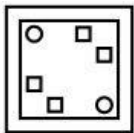
A piece of paper is folded and punched as shown below in the question figures. From the given answer figures, indicate how it will appear when opened?

नीचे के प्रश्न आकृतियों में दिखाए अनुसार कागज को मोड़कर छेदने तथा खोलने के बाद वह किस उत्तर आकृति जैसा दिखाई देगा?



Options:

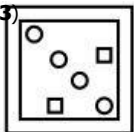
1)



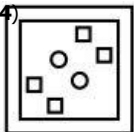
2)



3)



4)



Correct Answer:

Candidate Answer:



QID : 46 -

A piece of paper is folded and punched as shown below in the question figures. From the given answer figures, indicate how it will appear when opened?

नीचे के प्रश्न आकृतियों में दिखाए अनुसार कागज को मोड़कर छेदने तथा खोलने के बाद वह किस उत्तर आकृति जैसा दिखाई देगा?



Options:

1)



2)



3)



4)



Correct Answer:



Candidate Answer:

QID : 47 -

Options:

1)



2)

3)



4)

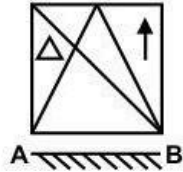
Correct Answer:

Candidate Answer:

QID : 48 -

If a mirror is placed on the line AB, then which of the answer figures is the right image of the given figure?

यदि एक दर्पण को AB रेखा पर रखा जाए, तो दी गई उत्तर आकृतियों में से कौन सी आकृति प्रश्न आकृति की सही प्रतिबिम्ब होगी?



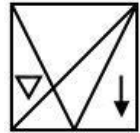
Options:

1)

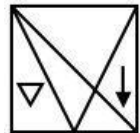


2)

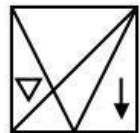
3)



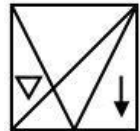
4)



Correct Answer:



Candidate Answer:



QID : 49 -

A word is represented by only one set of numbers as given in any one of the alternatives. The sets of numbers given in the alternatives are represented by two classes of alphabets as shown in the given two matrices. The columns and rows of **Matrix-I** are numbered from 0 to 4 and that of **Matrix-II** are numbered from 5 to 9. A letter from these matrices can be represented first by its row and next by its column, for example, 'E' can be represented by 10, 22, etc., and 'O' can be represented by 56, 78, etc. Similarly, you have to identify the set for the word "HALT".

एक शब्द केवल एक संख्या-समूह द्वारा दर्शाया गया है, जैसा कि विकल्पों में से किसी एक में दिया गया है। विकल्पों में दिए गए संख्या-समूह अक्षरों के दो वर्गों द्वारा दर्शाए गए हैं, जैसा कि दिए गए दो आव्यूहों में है। **आव्यूह-I** के स्तम्भ और पंक्ति की संख्या 0 से 4 है और **आव्यूह-II** की 5 से 9। इन आव्यूहों से एक अक्षर को पहले उसकी पंक्ति और बाद में स्तम्भ संख्या द्वारा दर्शाया जा सकता है। उदाहरण के लिए 'E' को 10, 22, आदि द्वारा दर्शाया जा सकता है तथा 'O' को 56, 78, आदि द्वारा दर्शाया जा सकता है। इसी तरह से आपको प्रश्न में दिए शब्द "HALT" के लिए समूह को पहचानना है।

Matrix-I आव्यूह-I					Matrix-II आव्यूह-II						
	0	1	2	3	4		5	6	7	8	9
0	T	E	R	A	H	5	L	O	P	U	E
1	E	R	H	T	A	6	O	P	E	L	U
2	A	H	E	R	T	7	U	E	L	O	P
3	R	T	A	H	E	8	P	L	U	E	O
4	H	A	T	E	R	9	E	U	O	P	L

Options:

1) 40, 03, 76, 24

2) 21, 41, 68, 13

3) 12, 14, 69, 00

4) 34, 41, 87, 31

Correct Answer: 21, 41, 68, 13**Candidate Answer:** 21, 41, 68, 13

QID : 50 -

A word is represented by only one set of numbers as given in any one of the alternatives. The sets of numbers given in the alternatives are represented by two classes of alphabets as shown in the given two matrices. The columns and rows of **Matrix-I** are numbered from 0 to 4 and that of **Matrix-II** are numbered from 5 to 9. A letter from these matrices can be represented first by its row and next by its column, for example, 'V' can be represented by 31, 44, etc., and 'D' can be represented by 67, 86, etc. Similarly, you have to identify the set for the word "GLOW".

एक शब्द केवल एक संख्या-समूह द्वारा दर्शाया गया है, जैसा कि विकल्पों में से किसी एक में दिया गया है। विकल्पों में दिए गए संख्या-समूह अक्षरों के दो वर्गों द्वारा दर्शाए गए हैं, जैसा कि दिए गए दो आव्यूहों में है। आव्यूह-I के स्तम्भ और पंक्ति की संख्या 0 से 4 है और आव्यूह-II की 5 से 9। इन आव्यूहों से एक अक्षर को पहले उसकी पंक्ति और बाद में स्तम्भ संख्या द्वारा दर्शाया जा सकता है। उदाहरण के लिए 'V' को 31, 44, आदि द्वारा दर्शाया जा सकता है तथा 'D' को 67, 86, आदि द्वारा दर्शाया जा सकता है। इसी तरह से आपको प्रश्न में दिए शब्द "GLOW" के लिए समूह को पहचानना है।

Matrix-I आव्यूह-I					Matrix-II आव्यूह-II						
0	1	2	3	4	5	6	7	8	9		
0	O	N	V	S	W	5	A	G	L	I	D
1	V	S	W	O	N	6	L	A	D	G	I
2	W	O	N	V	S	7	D	I	A	L	G
3	N	V	S	W	O	8	I	D	G	A	L
4	S	W	O	N	V	9	G	L	I	D	A

Options:

1) 56, 89, 01, 04

2) 68, 78, 21, 42

3) 87, 65, 22, 41

4) 95, 57, 13, 33

Correct Answer: 95, 57, 13, 33**Candidate Answer:** 95, 57, 13, 33**QID : 51 -** Which among the following comes under tertiary sector of Indian Economy?

निम्नलिखित में से कौन भारतीय अर्थव्यवस्था में तृतीयक क्षेत्र के अंतर्गत आता

है? **Options:**

1) Cloth Industry

कपड़ा उद्योग

2) Transport of goods

वस्तुओं का परिवहन

3) Dairy

डेयरी

4) Sugar Industry

चीनी उद्योग

Correct Answer: Transport of goods

वस्तुओं का परिवहन

Candidate Answer: Dairy

डेयरी

QID : 52 - _____ publishes Economic Survey in India.

भारतीय आर्थिक समीक्षा _____ का प्रकाश करता है।

Options:

1) Government of India

भारत सरकार

2) Ministry of Finance

वित्त मंत्रालय

3) NITI Aayog

नीति आयोग

4) Prime Minister of India

भारत के प्रधानमंत्री

Correct Answer: Ministry of Finance

वित्त मंत्रालय

Candidate Answer: Ministry of Finance

वित्त मंत्रालय

QID : 53 - In which economic system the government decides what goods are to be produced in accordance with the needs of society?

किस आर्थिक प्रणाली में सरकार यह निर्णय लेती है कि समाज के आवश्यकताओं के अनुसार किन वस्तुओं का उत्पादन

किया जाए? **Options:**

1) Socialist

सामाजवादक

2) Mixed

मिश्रित

3) Capitalist

पूंजीवादक

4) Traditional

पारंपरिक

Correct Answer: Socialist

सामाजवादक

Candidate Answer: [NOT ANSWERED]**QID : 54** - 1 Rupee note bears the signature of whom?

एक रुपये के नोट पर किसके हस्ताक्षर होते हैं?

Options:

1) Government of India

भारत सरकार

2) Chief Justice of India

भारतीय मुख्य न्यायाधीश

3) Finance Secretary of India

भारतीय वित्त सचिव

4) Prime Minister of India

भारत का प्रधानमंत्री

Correct Answer: Finance Secretary of India

भारतीय वित्त सचिव

Candidate Answer: [NOT ANSWERED]**QID : 55** - Which five year plan recognized human development as the core of all developmental efforts?

किस पंचवर्षीय योजना ने मानव विकास को सभी विकास के आधार का मूल

बताया था? **Options:**

1) First Five Year Plan

पहली पंचवर्षीय योजना

2) Second Five Year Plan

दूसरी पंचवर्षीय योजना

3) Eighth Five Year Plan

आठवीं पंचवर्षीय योजना

4) Ninth Five Year Plan

नौवीं पंचवर्षीय योजना

Correct Answer: Eighth Five Year Plan

आठवीं पंचवर्षीय योजना

Candidate Answer: Eighth Five Year Plan

आठवीं पंचवर्षीय योजना

QID : 56 - A system of rules that takes effect when a military authority takes control of the normal administration of justice is called as _____.

सेना द्वारा शासन तथा यायपात्रका को अपने नियंत्रण में लेने के बाद लागू कायदे कानून को _____ कहते हैं।

Options:

1) Coup

त तापलट

2) Strike

हड़ताल

3) Martial law

माशर लॉ

4) Political prisoner

राजनैतिक बंदक

Correct Answer: Martial law

माशर लॉ

Candidate Answer: Coup

त तापलट

QID : 57 - Who among the following is the most important political institution in a democratic country?

निम्नलिखित में से कौन कौनसी लोकतांत्रिक देश का सबसे महत्वपूर्ण राजनैतिक संस्था है?

Options:

1) President

राष्ट्रपति

2) Parliament

संसद

3) Prime Minister

प्रधानमंत्री

4) Cabinet Ministers

मंत्रिपरिषद्

Correct Answer: Prime Minister

प्रधानमंत्री

Candidate Answer: Parliament

संसद

QID : 58 - Which kind of decisions are usually based on careful calculation of gains and losses?

किस प्रकार के निर्णय आमतौर पर हानि-लाभ का सावधानीपूर्वक हिसाब लगाकर लिये जाते हैं?

Options:

1) Moral

नैतिक

2) Socialist

समाजवादक

3) Prudential

युक्तिपरक

4) Ethnic

संजातीय

Correct Answer: Prudential

युक्तिपरक

Candidate Answer: [NOT ANSWERED]

QID : 59 - Emergency provisions in Indian Constitution has been taken from _____.

भारतीय संविधान में आपात उपबंध _____ से लिए गए हैं।

Options:

1) British constitution

ब्रिटिश संविधान

2) Government of India Act 1935

भारत सरकार अधिनियम 1935

3) Irish constitution

आयरिश संविधान

4) Japanese constitution

जापानी संविधान

7/31/2017

Staff Selection Commission

Correct Answer: Government of India Act 1935

भारत सरकार अधिनियम 1935

Candidate Answer: Government of India Act 1935
भारत सरकार अधिनियम

1935 **QID : 60 -**

Match the following.

निम्नलिखित का मिलान कीजिए।

Column – I / स्तंभ – I	Column – II / स्तंभ – II
1. Acquisition of Indian citizenship भारतीय नागरिकता को प्राप्त करने का तरीका	a. By Deprivation वंचित करने पर
2. Loss of Indian citizenship भारतीय नागरिकता को अंत करने का तरीका	b. Equality before law and equal protection of laws विधि के तहत समता तथा विधियों के समान संरक्षण
3. Fundamental Right मूल अधिकार	c. By Registration पंजीकरण से

Options:

1) 1-c, 2-a, 3-b

2) 1-b, 2-a, 3-c

3) 1-c, 2-b, 3-a

4) 1-b, 2-c, 3-a

Correct Answer: 1-c, 2-a, 3-b

Candidate Answer: 1-c, 2-a, 3-b

QID : 61 - Which of the following can be amended by special majority?

निम्नलिखित में से कौनसे विशेष बहुमत द्वारा संशोधित किया जा सकता

है? **Options:**

1) Directive Principles of State Policy

राय के नीति निर्देशक तत्व

2) Rules of Procedure in Parliament

संसद को चलाने के नियम

3) Admission of new state

नए राज्य का गठन

4) Use of English language in Parliament

संसद में अंग्रेजी भाषा का योग

Correct Answer: Directive Principles of State Policy

राय के नीति निर्देशक तत्व

Candidate Answer: Admission of new state

नए राज्य का गठन

QID : 62 - For how much time Financial Emergency can be proclaimed?

वित्तीय आपातकाल कितने समय के लिए लागू किया जा सकती

है? **Options:**

1) 6 months

6 महीने

2) 12 months

12 महीने

3) 24 months

24 महीने

4) No maximum period

कोई अधिकतम अवधि नहीं

Correct Answer: No maximum period

Candidate Answer: 12 months

12 महकने

QID : 63 - Which among the following do not participate in election of the President?

न नलखत म से कौन रा पत के चुनाव म ह सा नहकं लेते ह?

Options:

1) Elected members of both the houses

दोन सदन के चुने हुए सद य

2) Elected members of legislative assemblies of states

वधानसभा के चुने हुए सद य

3) Elected members of legislative assemblies of Delhi and Puducherry

दलक तथा पुदु चेरक वधान सभा के चुने हुए सद य

4) Nominated members of state legislative assemblies

वधानसभा के नामांकत कए गए सद य

Correct Answer: Nominated members of state legislative assemblies

वधानसभा के नामांकत कए गए सद य

Candidate Answer: Nominated members of state legislative assemblies

वधानसभा के नामांकत कए गए सद य

QID : 64 - In which year (in A.D) did Babar invaded India?

बाबर ने भारत पर कस वष (ई. म) आ मण कया था?

Options:

1) 1530

2) 1520

3) 1526

4) 1550

Correct Answer: 1526

Candidate Answer: 1526

QID : 65 - Which among the following metal was not found in Harappan civilization?

न नलखत म से कौन सी धातु हइ पन सयता म नहकं पायी गई थी?

Options:

1) Gold

सोना

2) Copper

ताँबा

3) Silver

चाँदक

4) Iron

लोहा

Correct Answer: Iron

लोहा

Candidate Answer: Iron

लोहा

QID : 66 - Who built Red Fort?

लाल कले का नमा ण कसने करवाया था?

Options:

1) Humayun

हुमायूँ

2) Akbar

अकबर

3) Shah Jahan

शाहजहाँ

4) Aurangzeb

औरंगज़ेब

Correct Answer: Shah Jahan

शाहजहाँ

Candidate Answer: Shah Jahan

QID : 67 - In whose reign Hiuen-Tsang visited India?

फक्सके शासन काल म ढवेन- सांग भारत आया था?

Options:

1) Jalauddin

जलाऊडीन

2) Harshvardhana

हषवधन

3) Jahangir

जहाँगीर

4) Pandayas

पा ढय

Correct Answer: Harshvardhana

हषवधन

Candidate Answer: Harshvardhana

हषवधन

QID : 68 - Set events in chronological order in which they happened.

1. Sepoy mutiny
2. Vasco da Gama reached India
3. Babur started mughal dynasty

दर गई घटनाओं को उनके कालानु म अनुसार लगाएँ।

1. सपाहक त्वडोह
2. वा को डी गामा भारत पहुँचा
3. बाबर दवारा मुगल सा ा य क शु आत

Options:

1) 1, 3, 2

2) 3, 1, 2

3) 2, 3, 1

4) 3, 2, 1

Correct Answer: 2, 3, 1

Candidate Answer: 2, 3, 1

QID : 69 - Which of the following planet is farthest from Sun?

फन नल्लाखत म से कौन सा ह सूर्य से सबसे दूर है?

Options:

1) Saturn

शान

2) Jupiter

बृह पत

3) Neptune

व ण

4) Uranus

अ ण

Correct Answer: Neptune

व ण

Candidate Answer: Neptune

व ण

QID : 70 - In ocean, where is 'Benthos' found?

महासागर म, 'फनतल जीवजात (बथोस)' कहाँ पाये जाते ह

? **Options:**

1) at bottom of ocean

महासागर के तल पर

2) at upper surface of ocean

महासागर के उपरक सतह पर

3) in an enclosed area of ocean

महासागर के सीमित े म

4) along the shore

तटकय थान पर

Correct Answer: at bottom of ocean

महासागर के तल पर

Candidate Answer: [NOT ANSWERED]

QID : 71 - In which continent 'Great Dividing Range' is located?

'महान स्वभाजक रेणी' किस महाद्वीप में स्थित है?

Options:

1) North America

उत्तर अमेरिका

2) South America

दक्षिण अमेरिका

3) Asia

एशिया

4) Australia

ऑस्ट्रेलिया

Correct Answer: Australia

ऑस्ट्रेलिया

Candidate Answer: Asia

एशिया

QID : 72 - 'Jog falls' is located on which river?

'जोग जलपात' किस नदी पर स्थित है?

Options:

1) Narmada

नर्मदा

2) Krishna

कृष्णा

3) Godavari

गोदावरी

4) Sharavati

शरावती

Correct Answer: Sharavati

शरावती

Candidate Answer: Sharavati

शरावती

QID : 73 - For a time difference of two hours, the longitudinal distance will be equal to _____.

दो घंटे के अंतराल के लिए देशांतर दूरी _____ के बराबर होगी।

Options:

1) 15°

2) 30°

3) 45°

4) 60°

Correct Answer: 30°

Candidate Answer: 30°

QID : 74 - Where does Amoeba digest its food?

अमीबा अपना भोजन कहाँ पचाता

है? **Options:**

1) Pseudopodia

पादाभ

2) Nucleus

केंद्रक

3) Food Vacuole

खादय धानी

4) Cell membrane

कोशिका झिल्ला

Correct Answer: Food Vacuole

खादय

Candidate Answer: [NOT ANSWERED]

QID : 75 - What are female gametes called as?

मादा यु मक को क्या कहते हैं?

Options:

1) Zygote

यु मन्ज

2) Ova

अंडाणु

3) Sperms

...

णु

Correct Answer: Ova

अंडाणु

Candidate Answer: Ova

अंडाणु

QID : 76 - Which of the following cell organelles are present only in plant cell?

निम्नलिखित में से कौन सी कोशिकांग केवल पादप कोशिका में ही पाए जाते हैं?

Options:

1) Lysosomes

लाइसोसोम

2) Plastids

लाइटोड

3) Cell membrane

कोशिका झिल्ला

4) Mitochondria

माइटोकॉन्ड्रिया

Correct Answer: Plastids

लाइटोड

Candidate Answer: Plastids

लाइटोड

QID : 77 - Muscles are connected to bones by connective tissue called as _____.

अस्थि से मांसपेशियों को जोड़ने वाला संयोजी ऊतक _____ कहलाता है।

Options:

1) tendon

कंडरा

2) ligament

नायु

3) neuron

यूरॉन

4) adipose

वसाभय

Correct Answer: tendon

कंडरा

Candidate Answer: ligament

नायु

QID : 78 -

Options:

1) 1-b, 2-a, 3-c

2) 1-a, 2-c, 3-b

3) 1-c, 2-a, 3-b

4) 1-a, 2-b, 3-c

Correct Answer: 1-b, 2-a, 3-c

Candidate Answer: 1-a, 2-b, 3-c

QID : 79 - Neurons are part of which system of human body?
 तंत्रिका कोशिका मानव शरीर के किस तंत्र का हिस्सा है?

Options:

1) Circulatory system

परसंचरण तं

2) Excretory system

उ सजन तं

3) Reproductive system

जनन तं

4) Nervous system

तंत्र का तं

Correct Answer: Nervous system

तंत्र का तं

Candidate Answer: Circulatory system

परसंचरण तं

QID : 80 - Which contact force is responsible for changing the state of motion of an object?

कौन से स पक बल के कारण व तुओं क गत क अव था म प रवतन आता

है? **Options:**

1) Magnetic force

चु बक य बल

2) Frictional force

घषण बल

3) Muscular force

पेशीय बल

4) Electrostatic force

ि थरस्वदयुत बल

Correct Answer: Frictional force

घषण बल

Candidate Answer: Frictional force

घषण बल

QID : 81 - According to law of reflection:

परावतन के नियम के अनुसार:

Options:

1) Angle of incidence is greater than angle of reflection

आपतन कोण परावतन कोण से अधिक होता है

2) Angle of incidence is smaller than angle of reflection

आपतन कोण परावतन कोण से कम होता है

3) Angle of incidence is always equal to angle of reflection

आपतन कोण सदैव परावतन कोण के बराबर होता है

4) Both angles are always unequal

दोन कोण सदैव असमान होते ह

Correct Answer: Angle of incidence is always equal to angle of reflection

आपतन कोण सदैव परावतन कोण के बराबर होता है

Candidate Answer: [NOT ANSWERED]**QID : 82** - What is the unit of relative density?

आपे क घन व का मा क रया है?

Options:1) kg/m^3 क ा./मीटर³2) g/cm^3 ा./सेमी.³3) mg/mm^3 मलक ा./मलकमी.³

4) No unit

कोई मा क नहकं है

Correct Answer: No unit

कोई मा क नहकं है

Candidate Answer: No unit

कोई मा क नहकं है

QID : 83 - Which law/principle states that when a body is immersed fully or partially in a fluid, it experiences an upward force that is equal to the weight of the fluid displaced by it?

कौन सा नियम/सिद्धांत बताता है कि जब किसी वस्तु को किसी तरल में पूर्ण या आंशिक रूप से डुबाया जाता है, तो वह ऊपर की दिशा में एक बल का अनुभव करती है जो वस्तु द्वारा हटाए गए तरल के भार के बराबर होता है?

Options:

- 1) Boyle's law
बॉयल के नियम
- 2) Charles law
चार्लस के नियम
- 3) Archimedes principle
आर्किमिडीज़ के सिद्धांत
- 4) Pascal's law
पास्कल के नियम

Correct Answer: Archimedes principle

आर्किमिडीज़ के सिद्धांत

Candidate Answer: Archimedes principle

आर्किमिडीज़ के सिद्धांत

QID : 84 - Which among the following is/are not an input devices?

- I. Scanner
- II. Joystick
- III. Plotter

निम्नलिखित में से कौन एक इनपुट डिवाइस नहीं है?

- I. स्कैनर
- II. जॉयस्टिक
- III. प्लॉटर

Options:

- 1) Only I
केवल I
- 2) Only II
केवल II
- 3) Only III
केवल III
- 4) Both I and II
I तथा II दोनों

Correct Answer: Only III

केवल III

Candidate Answer: Only III

केवल III

QID : 85 - Protocol used for receiving an email is _____.

_____ संलेख का उपयोग ई-मेल प्राप्त करने के लिए किया जाता है।

Options:

- 1) HTTP
एच. टि. टि. पी.
- 2) FTP
एफ. टि. पी.
- 3) POP – 3
पी. ओ. पी. – 3
- 4) SSH
एस. एस. एच.

Correct Answer: POP – 3

पी. ओ. पी. – 3

Candidate Answer: POP – 3

पी. ओ. पी. – 3

QID : 86 - Tartaric Acid is not found in _____.

टार्टरिक अम्ल _____ में नहीं पाया जाता है।

Options:

1) Tamarind

इमली

2) Grapes

अमूर

3) Unripe mangoes

कच्चा आम

4) Spinach

पालक

Correct Answer: Spinach

पालक

Candidate Answer: Spinach

पालक

QID : 87 - What is the chemical name of quick lime?

जल्दी बुझा हुआ चूने का रसायनक नाम क्या

है? **Options:**

1) Calcium carbonate

कैल्शियम कार्बोनेट

2) Sodium hydroxide

सोडियम हाइड्रॉक्साइड

3) Calcium oxide

कैल्शियम ऑक्साइड

4) Calcium sulphate

कैल्शियम सल्फेट

Correct Answer: Calcium oxide

कैल्शियम ऑक्साइड

Candidate Answer: Calcium oxide

कैल्शियम ऑक्साइड

QID : 88 - What is the common name of CaOCl_2 ? CaOCl_2 का सामान्य नाम क्या है?**Options:**

1) Washing soda

वाशिंग सोडा

2) Bleaching powder

लकचिंग पाउडर

3) Baking powder

बेकिंग पाउडर

4) Baking soda

बेकिंग सोडा

Correct Answer: Bleaching powder

लकचिंग पाउडर

Candidate Answer: Bleaching powder

लकचिंग पाउडर

QID : 89 - In a periodic table, while moving from left to right in a period, number of _____ remains same.

आवत सारणी में, एक आवर्त में बाएँ से दाएँ जाने पर, _____ संख्या समान होती है।

Options:

1) electrons

इलेक्ट्रॉन

2) protons

प्रोटॉन

3) shells

कोश

4) neutrons

न्यूट्रॉन

Correct Answer: shells

कोश

Candidate Answer: shells

कोश

QID : 90 - Which among the following is an Abiotic component of environment?

निम्नलिखित में से कौन सा पदार्थ पर्यावरण का एक अजैव घटक

है? **Options:**

1) Green plants

हरे पौधे

2) Non-Green plants

गैर-हरे पौधे

3) Water

पानी

4) Parasites

परजीवी

Correct Answer: Water

पानी

Candidate Answer: Water

पानी

QID : 91 - Cellulose fibers are organic pollutant mainly produced by which Industry/Industries?

I. Mining Industry

II. Soap and detergent Industry

III. Paper and Pulp Industry

किस उद्योग से मुख्य तौर पर जैव दूषक सेलुलोज रेश का उत्पादन होता है?

I. खनन उद्योग

II. साबुन तथा डिटर्जेंट उद्योग

III. कागज और लुगदक उद्योग

Options:

1) Only I

केवल I

2) Only II

केवल II

3) Only III

केवल III

4) Both II and III

II तथा III दोनों

Correct Answer: Only III

केवल III

Candidate Answer: [NOT ANSWERED]

QID : 92 - Which among the following is not a Rabi crop?

निम्नलिखित में से कौन रबी फसल नहीं है?

Options:

1) Barley

जौ

2) Wheat

गहूँ

3) Groundnut

मूंगफली

4) Mustard

सरस

Correct Answer: Groundnut

मूंगफली

Candidate Answer: Groundnut

मूंगफली

QID : 93 - For which disease, Ministry of Health and Family Welfare has launched 'Test and Treat' policy?

किस रोग के लिए स्वास्थ्य एवं परिवार कल्याण विभाग द्वारा 'टेस्ट एंड ट्रीट' नीति आरंभ की है?

Options:

1) Chicken pox

चेचक

2) HIV

एच. आई. वी.

3) Polio

पोलियो

4) Tuberculosis

य रोग

Correct Answer: HIV

एच. आई. वी.

Candidate Answer: Tuberculosis

य रोग

QID : 94 - Laser was invented by _____.

लेज़र का आविष्कार _____ ने किया था।

Options:

1) A. H. Taylor

ए. एच. टेलर

2) T. H. Maiman

ट. एच. मैमन

3) Lee De Forest

ली दे फारेस्ट

4) Thomas Edison

थॉमस एडिसन

Correct Answer: T. H. Maiman

ट. एच. मैमन

Candidate Answer: T. H. Maiman

ट. एच. मैमन

QID : 95 - Twiddle is associated with _____.

ट्विडल _____ खेल से संबंधित है।

Options:

1) Table Tennis

टेबल टेनिस

2) Lawn Tennis

लॉन टेनिस

3) Golf

गोल्फ

4) Swimming

तैराकी

Correct Answer: Table Tennis

टेबल टेनिस

Candidate Answer: [NOT ANSWERED]

QID : 96 - 'Madhubani' is a famous folk painting form of which Indian State?

'मधुबनी' भारत के किस राज्य की प्रसिद्ध लोक कलाकृति है?

Options:

1) Madhya Pradesh

मध्य प्रदेश

2) Jharkhand

झारखंड

3) Bihar

बिहार

4) Uttar Pradesh

उत्तर प्रदेश

Correct Answer: Bihar

बिहार

Candidate Answer: [NOT ANSWERED]

QID : 97 - Who among the following has been designated as UN messenger of peace?

निम्नलिखित में से कौनसे संयुक्त राष्ट्र के शांतिदूत के रूप में नामांकित किया गया

है? **Options:**

1) Gururaja Bhat

गुरुराजा भट

2) Shrinivas Kulkarni

श्रीनिवास कुलकर्णी

3) Malala Yousafzai

मलाला युसुफ़ज़ई

4) Emma Watson

एमा वॉटसन

Correct Answer: Malala Yousafzai

मलाला युसुफ़ज़ई

Candidate Answer: Malala Yousafzai

मलाला युसुफ़ज़ई

QID : 98 - 'The Red Sari' is written by _____.

'द रेड सारी' _____ के द्वारा लिखी गई है।

Options:

1) Mamta Banerjee

ममता बनर्जी

2) Javier Moro

जेवियर मोरो

3) Malala Yousafzai

मलाला युसुफ़ज़ई

4) Neel Mukherjee

नील मुखर्जी

Correct Answer: Javier Moro

जेवियर मोरो

Candidate Answer: [NOT ANSWERED]

QID : 99 - Which country will host 9th BRICS summit?

नवी BRICS सम्मेलन का मेजबानी कौन सा देश करेगा?

Options:

1) Brazil

ब्राजील

2) China

चीन

3) Russia

रूस

4) India

भारत

Correct Answer: China

चीन

Candidate Answer: China

चीन

QID : 100 - Which of the following is not a member of Indian Ocean Rim Association (IORA)?

निम्नलिखित में से कौन हिंद महासागर तटस्थ क्षेत्रीय सहयोग संघ (IORA) का सदस्य नहीं है?

Options:

1) Bangladesh

बांग्लादेश

2) Mauritius

मॉरिशस

3) Afghanistan

अफ़ग़ानिस्तान

4) India

भारत

7/31/2017

Staff Selection Commission

Correct Answer: Afghanistan

अफ़्गानिस्तान

Candidate Answer: Afghanistan

अफ़ग़ानिस्तान

QID : 101 - How many factors of 108 is/are prime number?

108 के फ़कतने गुणनखंड अभा य सं या है/ह?

Options:

- 1) 2
- 2) 3
- 3) 5
- 4) 6

Correct Answer: 2

Candidate Answer: 5

QID : 102 - Which of the following expression(s) is/are true?

- I. $\sqrt{5} + \sqrt{5} > \sqrt{2} + \sqrt{8}$
- II. $\sqrt{3} + \sqrt{7} > \sqrt{2} + \sqrt{8}$
- III. $\sqrt{5} + \sqrt{5} > \sqrt{3} + \sqrt{7}$

निम्नलिखित म से कौन सा/कौन से व्यंजक सही है/ह?

- I. $\sqrt{5} + \sqrt{5} > \sqrt{2} + \sqrt{8}$
- II. $\sqrt{3} + \sqrt{7} > \sqrt{2} + \sqrt{8}$
- III. $\sqrt{5} + \sqrt{5} > \sqrt{3} + \sqrt{7}$

Options:

- 1) Only I
केवल I
- 2) Only I and III
केवल I तथा III
- 3) Only II
केवल II
- 4) All expressions are true
सभी व्यंजक सही ह

Correct Answer: All expressions are true

सभी व्यंजक सही ह

Candidate Answer: All expressions are true

सभी व्यंजक सही ह

QID : 103 - Which of the following expression(s) is/are true?

- I. 337 is a prime number.
- II. The number 12 has 6 positive factors.
- III. 32724 is completely divisible by 9.

निम्नलिखित म से कौन सा/कौन से व्यंजक सही है/ह?

- I. 337 एक अभा य सं या है।
- II. सं या 12 के 6 धना मक गुणनखंड है।
- III. 32724 पूर्णतः 9 से भा य है।

Options:

- 1) Only I
केवल I
- 2) Only I and II
केवल I तथा II
- 3) Only II and III
केवल II तथा III
- 4) All expressions are true
सभी व्यंजक सही ह

Correct Answer: All expressions are true

सभी व्यंजक सही ह

Candidate Answer: All expressions are true

सभी व्यंजक सही ह

QID : 104 -**Options:**

1)

2)

3)

4) All are equal

सभी बराबर ह

Correct Answer: All are equal

सभी बराबर ह

Candidate Answer: All are equal

सभी बराबर ह

QID : 105 - What is the value of $(1004)^2 - (998)^2$? $(1004)^2 - (998)^2$ का मान क्या है?**Options:**

1) 11012

2) 12012

3) 120012

4) 1212

Correct Answer: 12012**Candidate Answer:** 12012**QID : 106 -** A and B together can complete a work in 15 days. They started together but after 5 days A left the work. If the remaining work is completed by B in 15 more days, then A alone can complete the entire work in how many days?

A तथा B एक काय को फलकर 15 फदन म पूरा कर सकते है। वे एक साथ काय करना ारंभ करते है परंतु 5 फदन के बाद A काय को छोड़ देता है। यदि शेष काय पूरा करने म B को 15 फदन और लगे, तो A अके ला पूरे काय को फकतने फदन म पूरा करेगा?

Options:

1) 25

2) 50

3) 35

4) 45

Correct Answer: 45**Candidate Answer:** 45**QID : 107 -** P is 20% more efficient than Q. If Q alone can finish a work in 10 days, then in how many days P alone will finish the work?

P, Q से 20% अफधक कायकु शल है। यदि Q अके ला फकसी काय को 10 फदन म पूरा कर सकता है, तो P अके ला उस काय को फकतने फदन म पूरा

करेगा?

Options:

1)

2) 8.5

3) 9

4) 12

Correct Answer:**Candidate Answer:****QID : 108 -** The ratio of marked price and cost price of an article is 6 : 5. If 15% discount is given, then how much is the profit (in percent)?

एक व तु के अंकत मूय तथा य मूय का अनुपात 6 : 5 है। यदि 15 फतशत क छूट दक जाए, तो लाभ (फतशत म) क्या

है? **Options:**

1) 4

2) 0.2

3) 2

4) 1

Correct Answer: 2

Candidate Answer: 2

QID : 109 - Out of the following, which is the best discount for a customer?

- I. 50% + 50% off
- II. 60% + 40% off
- III. 70% + 30% off
- IV. Buy 1 get 4

निम्नलिखित में से, उपभोक्ता के लिए सबसे अच्छा छूट कौन सी है?

- I. 50% + 50% का छूट
- II. 60% + 40% का छूट
- III. 70% + 30% का छूट
- IV. 1 खरीदे 4 पाय

Options:

1) Only I and IV

केवल I तथा IV

2) Only II

केवल II

3) Only I, II and III

केवल I, II तथा III

4) Only III

केवल III

Correct Answer: Only III

केवल III

Candidate Answer: Only III

केवल III

QID : 110 -

Options:

1) 3

2) 2

3) 4/3

4) 7/3

Correct Answer: 3

Candidate Answer: 3

QID : 111 - In a mixture, milk and water are in ratio of 2 : 3. Some milk is added to the mixture because of which ratio of milk and water becomes 2 : 1. How much milk was added as a percentage of initial mixture?

एक मिश्रण में, दूध तथा पानी 2 : 3 के अनुपात में हैं। मिश्रण में कुछ दूध मिलाया गया जिससे दूध तथा पानी का अनुपात 2 : 1 हो गया। आरंभिक मिश्रण के प्रतिशत में कितना दूध मिलाया गया है?

Options:

1) 75

2) 60

3) 80

4) 50

Correct Answer: 80

Candidate Answer: 80

QID : 112 - The average of marks obtained by A and B is 15 less than that of average marks obtained by B and C. If the marks obtained by C is 65, what is the marks obtained by A?

A तथा B द्वारा प्राप्त अंकों का औसत B तथा C द्वारा प्राप्त अंकों के औसत से 15 कम है। यदि C द्वारा प्राप्त अंक 65 है, तो A द्वारा प्राप्त अंक क्या है?

Options:

- 1) 35
- 2) 50
- 3) 65
- 4) 80

Correct Answer: 35**Candidate Answer:** 35**QID : 113** - What is the average of squares of first 10 natural numbers?

थम 10 ाकृतक संयाओं के वगफि का औसत रया है?

Options:

- 1) 55.5
- 2) 45.6
- 3) 38.5
- 4) 40.5

Correct Answer: 38.5**Candidate Answer:** 38.5**QID : 114** - Cost price and selling price of an article are in ratio 13 : 9. If the loss incurred on article is Rs 320, what is the sum (in Rs) of cost and selling prices?

एक वतु के य मूय तथा व य मूय का अनुपात 13 : 9 है। यद वतु पर 320 v. क हाफन होती है, तो य तथा व य मूय का जोड़ (v. म) कतना है? **Options:**

- 1) 1480
- 2) 1620
- 3) 1500
- 4) 1760

Correct Answer: 1760**Candidate Answer:** 1760**QID : 115** - By selling 64 apples for Rs 60 a person gains 25%. In order to have 40% loss, how many apples shall he sell for Rs 36?

64 सेब को 60 v. पर बेचने पर एक तयिरत को 25% का लाभ होता है। 40% क हाफन के लिए, उसे 36 v. म कतने सेब बेचने चाहए?

Options:

- 1) 80
- 2) 70
- 3) 60
- 4) 50

Correct Answer: 80**Candidate Answer:** 80**QID : 116** - A mixture contains 18% copper by weight. How much mixture (in kg) is required to obtain 81 kg of copper?

एक मण म भार के अनुसार 18% ताँबा है। 81 क. ा। ताँबा ात करने के लिए कतने मण (क. ा. म) क आवयकता है? **Options:**

- 1) 350
- 2) 300
- 3) 450
- 4) 250

Correct Answer: 450**Candidate Answer:** 450**QID : 117** - A person spends 30% of his income on food, 20% on children's education and 60% of remaining on house rent. What percent of income is left with him?

एक तयिरत अपनी आय का 30% भोजन पर, 20% बच क फशा पर तथा शेष का 60% घर के किराये पर तय करता है। उसके पास आय का कतना तशत शेष बचा है?

Options:

- 1) 20
- 2) 30
- 3) 35
- 4) 25

Correct Answer: 20**Candidate Answer:** 20

QID : 118 - A man rides his vehicle at the rate of 36 km/hr but stops for 12 minutes, to change parts at the end of every 14th km. What will be the time taken to cover a distance of 90 km?

एक व्यक्ति अपना वाहन 36 कि.मी./घंटा की दर से चलाता है परंतु प्रत्येक 14 कि.मी. पर पुर्जा को बदलने के लिए 12 मिनट के लिए रुकता है। 90 कि.मी. की दूरी को यात्रा करने के लिए कितना समय लगेगा?

Options:

- 1) 6 hour 12 minutes
6 घंटे 12 मिनट
- 2) 2 hours 30 minutes
2 घंटे 30 मिनट
- 3) 3 hours 42 minutes
3 घंटे 42 मिनट
- 4) 5 hours 32 minutes
5 घंटे 32 मिनट

Correct Answer: 3 hours 42 minutes

3 घंटे 42 मिनट

Candidate Answer: 3 hours 42 minutes

3 घंटे 42 मिनट

QID : 119 - A walks at a uniform speed of 8 km/hr and 8 hours after his start, B starts on his cycle after him at speed of 24 km/hr. How far (in km) from the starting point will B catch A?

A, 8 कि.मी./घंटा की एक समान गति से चलता है तथा उसके आरंभ होने के 8 घंटे के पश्चात्, B अपनी साइकिल से 24 कि.मी./घंटा की गति से उसके पीछे निकलता है। आरंभ के तब से कितनी दूरी (कि.मी. में) पर B, A को पकड़ेगा?

Options:

- 1) 72
- 2) 96
- 3) 120
- 4) 144

Correct Answer: 96**Candidate Answer:** 96

QID : 120 - What is the rate (in percent) of simple interest at which a sum of money becomes three times of itself in 50 years?

साधारण ब्याज की दर (प्रतिशत में) कितनी है जिस पर कोई धनराशि 50 वर्षों में वयं की तुलनी हो जाती है?

Options:

- 1) 2
- 2) 4
- 3) 5
- 4) 8

Correct Answer: 4**Candidate Answer:** 4

QID : 121 - A sum of Rs 3100 is lent out at simple interest in two parts. One at 8% per annum and another at 6% per annum. If the total annual interest is Rs 212, then what is the money (in Rs) lent at rate of 8%?

3100 ₹ की एक धनराशि दो भागों में साधारण ब्याज पर उधार दी जाती है। एक भाग 8% की दर से तथा अर्ध भाग पर 6% की दर से दिया जाता है। यदि कुल वार्षिक ब्याज 212 ₹ है, तो

8% की दर पर दी गई धनराशि (₹ में) क्या है?

Options:

- 1) 1000
- 2) 1250
- 3) 1300
- 4) 1400

Correct Answer: 1300

QID : 122 -

How many females read newspaper A?

कितनी महिलाएँ समाचार-प A पढ़ती ह?

Options:

1) 3600

2) 3200

3) 2400

4) 2800

Correct Answer: 2400

Candidate Answer: 2400

QID : 123 -

What is difference in number of males reading newspaper B and number of males reading newspaper D?

समाचार-प B पढ़ने वाले पुष तथा समाचार-प D पढ़ने वाले पुष क सं या म कितना अंतर

है? **Options:**

1) 1600

2) 2000

3) 2400

4) 800

Correct Answer: 800

Candidate Answer: 800

QID : 124 -

For which two newspaper the number of females reading them is same?

कौन से दो समाचार-प को पढ़ने वालक महिलाओं क सं या समान है?

Options:

1) D and E

D तथा E

2) C and E

C तथा E

3) A and B

A तथा B

4) A and C

A तथा C

Correct Answer: A and B

A तथा B

Candidate Answer: A and B

A तथा B

QID : 125 -

By how much percent females reading newspaper E are more than the males reading newspaper C?

समाचार-प E पढ़ने वालक महिलाएँ, समाचार-प C पढ़ने वाले पुष से कितने तशत अफधक है?

Options:

1) 233.33

2) 133.33

3) 266.66

4) 333.33

Correct Answer: 133.33

Candidate Answer: 133.33

QID : 126 - If length and breadth of a cuboid is increased by 20%, then by how much percent the height should be reduced to keep the volume same?

यदि एक घनाभक लंबाई तथा चौड़ाई को 20% बढ़ाया जाए, तो उसका ऊँचाई को कितना प्रतिशत कम किया जाना चाहिए जिससे वह उसका आयतन अपरिवर्तित रहे?

Options:

- 1) 40
- 2) 44
- 3)
- 4)

Correct Answer:

Candidate Answer:

QID : 127 - The volume of a conical tent is 154 cm^3 and the area of its base is 38.5 cm^2 . What is the length (in cm) of canvas required to build the tent, if the canvas is 2 cm in width?

एक शंक्वाकार टेंट का आयतन 154 से.मी.^3 है तथा उसके आधार का क्षेत्रफल 38.5 से.मी.^2 है। यदि टेंट को बनाने वाले कपड़े की चौड़ाई 2 से.मी. हो, तो टेंट को बनाने के लिए कितने लंबे

(से.मी. म) कपड़े की आवश्यकता

है? **Options:**

- 1) 71.35
- 2) 68.75
- 3) 73.25
- 4) 75.75

Correct Answer: 68.75

Candidate Answer: [NOT ANSWERED]

QID : 128 - A metallic sphere is melted and moulded to form conical shaped bullets. If radius of the bullet is a twice of its height and radius of bullet is half of the radius of the metallic sphere, then what is the numbers of bullet formed?

एक धातु के गोले को पिघलाकर एक शंक्वाकार गोले में ढाला जाता है। यदि उस गोले की त्रिज्या उसकी ऊँचाई से दोगुनी हो तथा गोले की त्रिज्या धातु के गोले की त्रिज्या से आधी हो, तो गोले की संख्या क्या है?

Options:

- 1) 32
- 2) 16
- 3) 128
- 4) 64

Correct Answer: 64

Candidate Answer: 64

QID : 129 - A chord of length 24 cm is drawn in a circle of diameter 40 cm. Another chord of length 32 cm is drawn in the same circle parallel to 24 cm long chord. What is the minimum distance (in cm) between them?

एक 40 से.मी. व्यास वाले वृत्त पर 24 से.मी. की एक जीवा खींची जाती है। एक और जीवा जिसकी लंबाई 32 से.मी. है उसी वृत्त में 24 से.मी. लंबाई वाली जीवा के समानांतर खींची जाती है। दोनों के बीच की न्यूनतम दूरी (से.मी. म) कितनी होगी?

Options:

- 1) 4
- 2) 2
- 3) 8
- 4) 3

Correct Answer: 4

Candidate Answer: 4

QID : 130 - If the length of a rectangle is increased by 50%, then by how much percent its breadth should be reduced to keep the area the same?

यदि एक आयत की लंबाई को 50 प्रतिशत बढ़ाया जाता है, तो उसकी चौड़ाई को कितना प्रतिशत कम किया जाना चाहिए जिससे वह उसका क्षेत्रफल अपरिवर्तित रहे?

Options:

- 1) 50
- 2)
- 3)

4)
C
o
r
r
e
c
t
A

nswer:

Candidate Answer:

रहे?

QID : 131 -**Options:**

- 1) - 81
2) 148
3) - 243
4) 227

Correct Answer: - 243**Candidate Answer:** - 243**QID : 132 -****Options:**

- 1) 1
2) 0
3) 2
4) - 1

Correct Answer: 0**Candidate Answer:** 0**QID : 133 -** If $x^3 + 6x^2 + 12x = 19$, then what is the value of x^3 ?यदि $x^3 + 6x^2 + 12x = 19$ हो, तो x^3 का मान क्या है?**Options:**

- 1) 8
2) 27
3) - 1
4) 1

Correct Answer: 1**Candidate Answer:** 1**QID : 134 -****Options:**

- 1) $2/5$
2) $3/5$
3) $4/5$
4) $1/5$

Correct Answer: $2/5$ **Candidate Answer:** $2/5$ **QID : 135 -** If $x^2 + 16 = -4x$, then what is the value of $x^3 - 64$?यदि $x^2 + 16 = -4x$ हो, तो $x^3 - 64$ का मान क्या है?**Options:**

- 1) 128
2) 0
3) 64
4) 256

Correct Answer: 0**Candidate Answer:** 128**QID : 136 -** PQRS is a rectangle, A, B, C and D are the mid points of sides PQ, QR, RS and PS respectively. If area of ΔPQR is 48 cm^2 , then what is the area (in cm^2) of ΔBCD ?PQRS एक आयत है, A, B, C तथा D मध्य भुजाओं PQ, QR, RS तथा PS के मध्य बिंदु हैं। यदि ΔPQR का क्षेत्रफल 48 से.मी.^2 है, तो ΔBCD का क्षेत्रफल (से.मी.² में) क्या है?

Options:

- 1) 24
- 2) 6
- 3) 16
- 4) 12

Correct Answer: 24**Candidate Answer:** 24**QID : 137** - If PA is the median of the triangle PQR and G be the centroid, then what is the ratio of $(PA + GA) : (PG - GA)$?

यदि PA, f भुज PQR क माि यका तथा G क 5क हो, तो $(PA + GA) : (PG - GA)$ का अनुपात रया है? **Options:**

- 1) 4 : 1
- 2) 3 : 1
- 3) 2 : 1
- 4) 3 : 2

Correct Answer: 4 : 1**Candidate Answer:** 4 : 1**QID : 138** - In a ΔPQR , PD is the median and G is centroid. If $PG = 24$ cm, then what is the length (in cm) of PD?

ΔPQR म, PD एक माि यका तथा G क 5क है। यदि $PG = 24$ से.मी. हो, तो PD क ल बाई (से.मी. म) रया है?

Options:

- 1) 48
- 2) 36
- 3) 60
- 4) 72

Correct Answer: 36**Candidate Answer:** 36**QID : 139** - The tangents drawn at the point P and Q of a circle centered at O meet at A. If $\angle POQ = 120^\circ$, then what is the ratio of $\angle PAQ : \angle PAO$?

एक वृ त िजसका के 5 O है क ऋ दु P तथा Q पर एक पश रेखा खीची जाती है, जो ऋ दु A पर मलती है। यदि $\angle POQ = 120^\circ$ हो, तो $\angle PAQ : \angle PAO$ का अनुपात रया है? **Options:**

- 1) 2 : 3
- 2) 4 : 1
- 3) 2 : 1
- 4) 5 : 2

Correct Answer: 2 : 1**Candidate Answer:** 2 : 1**QID : 140** - ABCD is a trapezium, such that $AB = CD$ and $AD \parallel BC$. $AD = 10$ cm and $BC = 18$ cm. If the area of ABCD is 70 cm^2 , then what is the value (in cm) of CD?

ABCD एक असमांतरभुज है, िजसम $AB = CD$ तथा $AD \parallel BC$ है। $AD = 10$ से.मी. तथा $BC = 18$ से.मी. है। यदि ABCD का े फल 70 से.मी² है, तो CD का मान (से.मी. म) रया है? **Options:**

- 1) 5
- 2) $\sqrt{29}$
- 3) $\sqrt{41}$
- 4) 6

Correct Answer: $\sqrt{41}$ **Candidate Answer:** $\sqrt{41}$ **QID : 141** - What is the value of $\sin(30 + x) - \cos(60 - x)$?

$\sin(30 + x) - \cos(60 - x)$ का मान रया है?

Options:

- 1) 1
- 2) 2
- 3) 0
- 4) $1/2$

Correct Answer: 0

Candidate Answer: 0

QID : 142 - What is the least value of $15 \cos^2 \theta + 17 \sin^2 \theta$?

$15 \cos^2 \theta + 17 \sin^2 \theta$ का यूनतम मान क्या है?

Options:

- 1) 14
- 2) 15
- 3) 2
- 4) 18

Correct Answer: 15

Candidate Answer: 15

QID : 143 -

Options:

- 1)
- 2)
- 3)
- 4)

Correct Answer:

Candidate Answer:

QID : 144 -

Options:

- 1) $17/12$
- 2) $-53/28$
- 3) $-27/25$
- 4) $31/23$

Correct Answer: $-53/28$

Candidate Answer: $-53/28$

QID : 145 -

Options:

- 1) 1
- 2) $1/\sqrt{3}$
- 3) $1/2$
- 4) 2

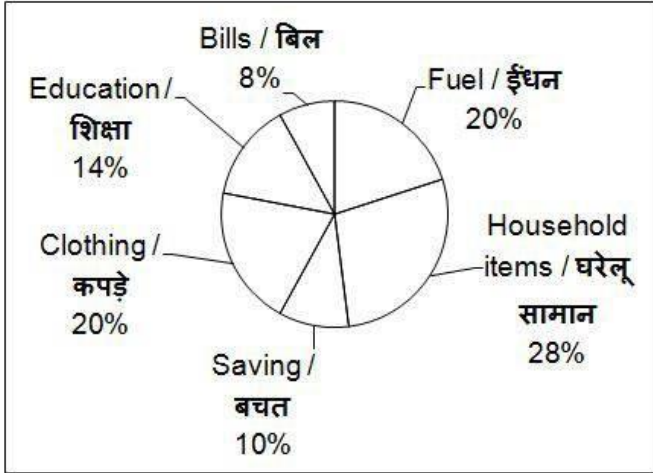
Correct Answer: 2

Candidate Answer: 2

QID : 146 -

The given pie chart shows the monthly expenditure on various items and monthly saving of a household. The same distribution is followed for all the months of the year.

दिए गए वृत्त चित्र में एक गृहिणी के विभिन्न घरेलू सामान पर मासिक व्यय तथा मासिक बचत को दर्शाया गया है। वर्ष के सभी महीनों के लिए समान वितरण लागू होता है।



If monthly income is Rs 50000, then how much is spent (in Rs) on Fuel?

यदि मासिक आय 50000 ₹ है, तो धन पर कितना व्यय (₹ में) हुआ है?

Options:

- 1) 12000
- 2) 10000
- 3) 13500
- 4) 15000

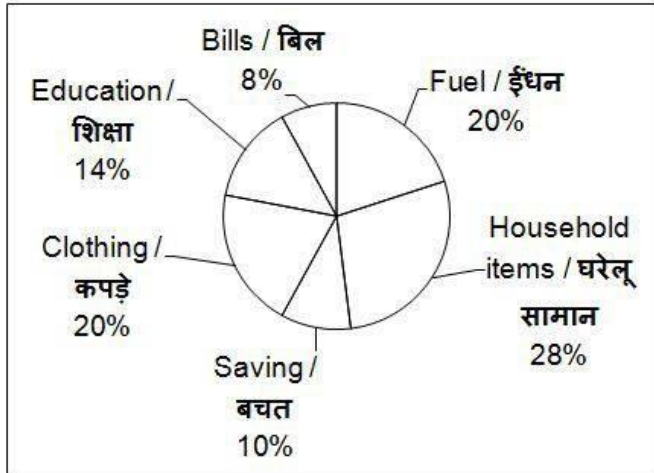
Correct Answer: 10000

Candidate Answer: 10000

QID : 147 -

The given pie chart shows the monthly expenditure on various items and monthly saving of a household. The same distribution is followed for all the months of the year.

दिए गए वृत्त चित्र में एक गृहिणी के विभिन्न घरेलू सामान पर मासिक व्यय तथा मासिक बचत को दर्शाया गया है। वर्ष के सभी महीनों के लिए समान वितरण लागू होता है।



If monthly income is Rs 65000, then what is the difference (in Rs) between expenditure on Household items and Clothing?

यदि मासिक आय 65000 ₹ है, तो घरेलू सामान तथा कपड़ों पर होने वाले व्यय (₹) में कितना अंतर है?

Options:

- 1) 5200
- 2) 6500
- 3) 7200
- 4) 4500

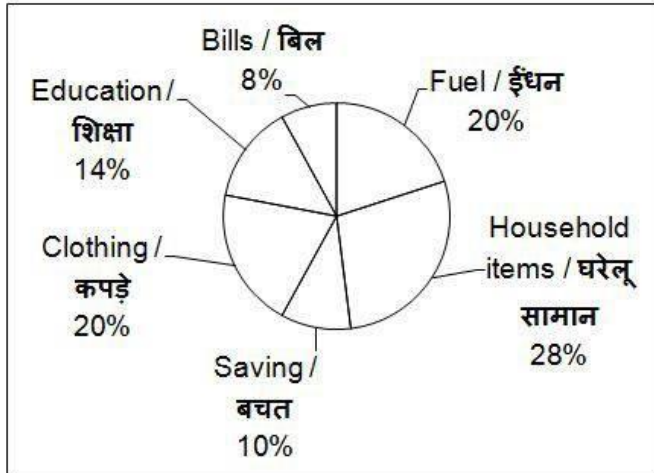
Correct Answer: 5200

Candidate Answer: 5200

QID : 148 -

The given pie chart shows the monthly expenditure on various items and monthly saving of a household. The same distribution is followed for all the months of the year.

दिए गए वृत्त चित्र में एक गृहिणी के विभिन्न घरेलू सामान पर मासिक व्यय तथा मासिक बचत को दर्शाया गया है। वर्ष के सभी महीनों के लिए समान वितरण लागू होता है।



If Rs 2400 are saved per month, then what is the monthly salary (in Rs) of the household?

यदि मत्माह 2400 ₹. क बचत क जाती है, तो घर क मासिक आय (₹. म)

रया है? **Options:**

1) 24000

2) 20000

3) 30000

4) 18000

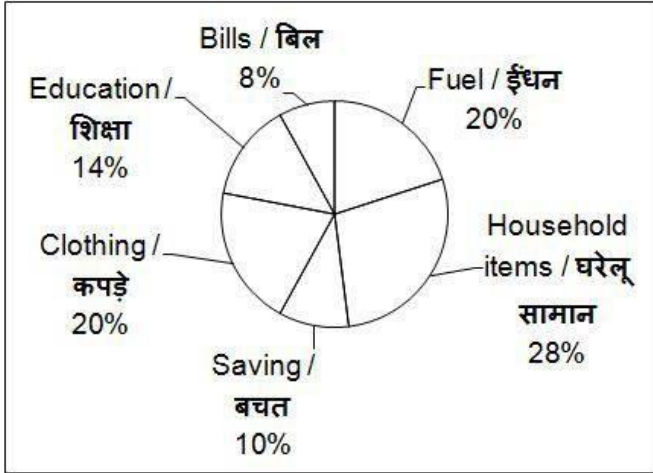
Correct Answer: 24000

Candidate Answer: 24000

QID : 149 -

The given pie chart shows the monthly expenditure on various items and monthly saving of a household. The same distribution is followed for all the months of the year.

दिए गए वृत्त चित्र में एक गृहिणी के विभिन्न घरेलू सामान पर मासिक व्यय तथा मासिक बचत को दर्शाया गया है। वर्ष के सभी महीनों के लिए समान वितरण लागू होता है।



If the difference in monthly expenditure on Fuel and Bills is Rs 4800, then what is the annual income of household?

यदि धन तथा बिल पर होने वाले मासिक व्यय में 4800 ₹ का अंतर है, तो घर का वार्षिक आय (₹ में) कितनी है? **Options:**

- 1) 660000
- 2) 600000
- 3) 540000
- 4) 480000

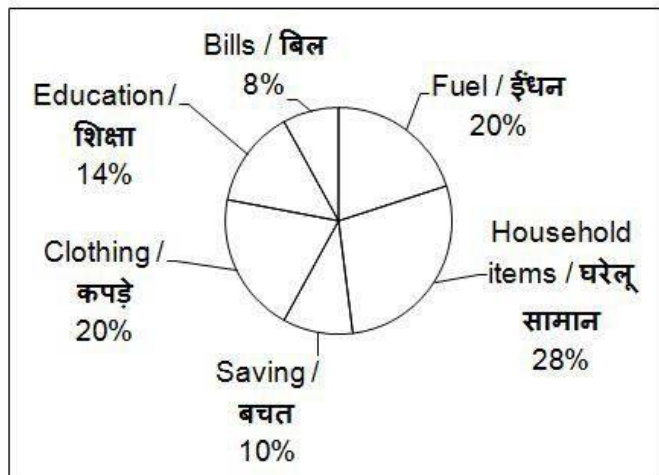
Correct Answer: 480000

Candidate Answer: 480000

QID : 150 -

The given pie chart shows the monthly expenditure on various items and monthly saving of a household. The same distribution is followed for all the months of the year.

दिए गए वृत्त चित्र में एक गृहिणी के विभिन्न घरेलू सामान पर मासिक व्यय तथा मासिक बचत को दर्शाया गया है। वर्ष के सभी महीनों के लिए समान वितरण लागू होता है।



If the difference in monthly expenditure on clothing and education is Rs 9000, then what is the difference (in Rs) in yearly saving and yearly expenditure on Bills?

यदि कपड़े पर होने वाले मासिक व्यय का अंतर 9000 ₹ है, तो वार्षिक बचत तथा बिल पर होने वाले वार्षिक व्यय का अंतर (₹ में) क्या है? **Options:**

- 1) 64000
- 2) 76000
- 3) 36000
- 4) 48000

Correct Answer: 36000

Candidate Answer: 36000

QID : 151 - In the following question, some part of the sentence may have errors. Find out which part of the sentence has an error and select the appropriate option. If a sentence is free from error, select 'No Error'.

Dr. Ritu was explain the (1)/ benefits of doing yoga at (2)/ least four times a week. (3)/ No Error (4)

Options:

- 1) 1
- 2) 2
- 3) 3
- 4) 4

Correct Answer: 1

Candidate Answer: 1

QID : 152 - In the following question, some part of the sentence may have errors. Find out which part of the sentence has an error and select the appropriate option. If a sentence is free from error, select 'No Error'.

After 70 years of independence many (1)/ socio-economic problems is still (2)/ remaining to be solved in India. (3)/ No error (4)

Options:

- 1) 1
- 2) 2
- 3) 3
- 4) 4

Correct Answer: 2

Candidate Answer: 2

QID : 153 - In the following question, some part of the sentence may have errors. Find out which part of the sentence has an error and select the appropriate option. If a sentence is free from error, select 'No Error'.

Gurgaon is full of tall buildings which is (1)/ at once its strength as well as weakness (2)/ depending upon how one looks at it. (3)/ No Error (4)

Options:

- 1) 1
- 2) 2
- 3) 3
- 4) 4

Correct Answer: 3

Candidate Answer: 3

QID : 154 - In the following question, some part of the sentence may have errors. Find out which part of the sentence has an error and select the appropriate option. If a sentence is free from error, select 'No Error'.

Unless you do not (1)/ give up bad habits (2)/ you will suffer. (3)/ No Error (4)

Options:

- 1) 1
- 2) 2
- 3) 3
- 4) 4

Correct Answer: 1

Candidate Answer: 1

QID : 155 - In the following question, some part of the sentence may have errors. Find out which part of the sentence has an error and select the appropriate option. If a sentence is free from error, select 'No Error'.

Vegetables as well as fruits (1)/ have fallen considerably (2)/ in prices in recent days. (3)/ No Error (4)

Options:

- 1) 1
- 2) 2
- 3) 3
- 4) 4

Correct Answer: 4

Candidate Answer: 4

QID : 156 - In the following question, the sentence given with blank to be filled in with an appropriate word. Select the correct alternative out of the four and indicate it by selecting the appropriate option.

Everyone was greatly assured _____ Roshni's awkward behaviour during the wedding ceremony.

Options:

- 1) on
- 2) at
- 3) of
- 4) for

Correct Answer: of

Candidate Answer: of

QID : 157 - In the following question, the sentence given with blank to be filled in with an appropriate word. Select the correct alternative out of the four and indicate it by selecting the appropriate option.

Deepak agreed _____ all my views but his parents did not.

Options:

- 1) of
- 2) with
- 3) on
- 4) to

Correct Answer: to

Candidate Answer: with

QID : 158 - In the following question, the sentence given with blank to be filled in with an appropriate word. Select the correct alternative out of the four and indicate it by selecting the appropriate option.

It was very hot, you _____ your jackets.

Options:

- 1) need not bring
- 2) need not have brought
- 3) need not brought
- 4) need not had been brought

Correct Answer: need not have brought

Candidate Answer: need not brought

QID : 159 - In the following question, the sentence given with blank to be filled in with an appropriate word. Select the correct alternative out of the four and indicate it by selecting the appropriate option.

I do not know where Akansha lives because I have been _____ of touch for quite sometime.

Options:

- 1) out
- 2) hardly
- 3) scarcely
- 4) her

Correct Answer: out

Candidate Answer: hardly

QID : 160 - In the following question, the sentence given with blank to be filled in with an appropriate word. Select the correct alternative out of the four and indicate it by selecting the appropriate option.

Rahul was _____ with a natural talent for painting.

Options:

- 1) given
- 2) entrusted
- 3) showered
- 4) endowed

Correct Answer: endowed

Candidate Answer: endowed

QID : 161 - In the following question, out of the four alternatives, select the word similar in meaning to the word given.

Fatuous

Options:

- 1) prudent
- 2) irrational
- 3) senile
- 4) renewal

Correct Answer: irrational

Candidate Answer: [NOT ANSWERED]

QID : 162 - In the following question, out of the four alternatives, select the word similar in meaning to the word given.

Bustle

Options:

- 1) quiet
- 2) fragile
- 3) haste
- 4) gloomy

Correct Answer: haste

Candidate Answer: [NOT ANSWERED]

QID : 163 - In the following question, out of the four alternatives, select the word similar in meaning to the word given.

Sauciness

Options:

- 1) assistance
- 2) impudence
- 3) meekness
- 4) venerate

Correct Answer: impudence

Candidate Answer: [NOT ANSWERED]

QID : 164 -

In the following question, out of the four alternatives, select the word similar in meaning to the word given.

Congruous

Options:

- 1) absurd
- 2) balanced
- 3) hidden
- 4) diligent

Correct Answer: balanced

Candidate Answer: hidden

QID : 165 -

In the following question, out of the four alternatives, select the word similar in meaning to the word given.

Contradict**Options:**

- 1) sanction
- 2) repose
- 3) despicable
- 4) confront

QID : 166 -

In the following question, out of the four alternatives, select the word opposite in meaning to the word given.

Trivial**Options:**

- 1) shallow
- 2) profound
- 3) immature
- 4) reckless

Correct Answer: profound

Candidate Answer: profound

QID : 167 -

In the following question, out of the four alternatives, select the word opposite in meaning to the word given.

Flagitious**Options:**

- 1) immoral
- 2) virtuous
- 3) profligate
- 4) displease

Correct Answer: virtuous

Candidate Answer: [NOT ANSWERED]

QID : 168 -

In the following question, out of the four alternatives, select the word opposite in meaning to the word given.

Abridge**Options:**

- 1) stretch
- 2) curtail
- 3) pacify
- 4) violate

Correct Answer: stretch

Candidate Answer: [NOT ANSWERED]

QID : 169 -

In the following question, out of the four alternatives, select the word opposite in meaning to the word given.

Solicit**Options:**

- 1) sanction
- 2) scorn
- 3) prohibit
- 4) disguise

Correct Answer: prohibit

Candidate Answer: [NOT ANSWERED]

QID : 170 -

In the following question, out of the four alternatives, select the word opposite in meaning to the word given.

Substantial**Options:**

- 1) doubtful
- 2) reliable
- 3) florid
- 4) enormous

Correct Answer: doubtful

Candidate Answer: [NOT ANSWERED]

QID : 171 - In the following question, out of the four alternatives, select the alternative which best expresses the meaning of the idiom/phrase.

a green horn**Options:**

- 1) an inexperienced man
- 2) a dangerous man
- 3) suspicious man
- 4) a wise person

Correct Answer: an inexperienced man

Candidate Answer: [NOT ANSWERED]

QID : 172 - In the following question, out of the four alternatives, select the alternative which best expresses the meaning of the idiom/phrase.

to paddle one's own canoe**Options:**

- 1) thoughtful
- 2) manage independently
- 3) to praise oneself
- 4) working vigorously

Correct Answer: manage independently

Candidate Answer: to praise oneself

QID : 173 - In the following question, out of the four alternatives, select the alternative which best expresses the meaning of the idiom/phrase.

to keep the pot**Options:**

- 1) to sharpen my wits
- 2) to be cautious
- 3) to keep controversy alive
- 4) to repent

Correct Answer: to keep controversy alive

Candidate Answer: [NOT ANSWERED]

QID : 174 - In the following question, out of the four alternatives, select the alternative which best expresses the meaning of the idiom/phrase.

to beat the air**Options:**

- 1) to settle a dispute
- 2) to gamble
- 3) to make efforts that are useless
- 4) to try to do the impossible

Correct Answer: to make efforts that are useless

Candidate Answer: to make efforts that are useless

QID : 175 - In the following question, out of the four alternatives, select the alternative which best expresses the meaning of the idiom/phrase.

threw a spanner**Options:**

- 1) reverie
- 2) disinterested
- 3) sabotage
- 4) boasting

Correct Answer: sabotage

Candidate Answer: [NOT ANSWERED]

QID : 176 - Improve the bracketed part of the sentence.

Sunil didn't pay any heed to his superior's instructions, **(I did neither)**.

Options:

- 1) nor did I
- 2) neither didn't I
- 3) I either did
- 4) No improvement

Correct Answer: nor did I**Candidate Answer:** I either did**QID : 177** - Improve the bracketed part of the sentence.The Arabian Nights **(have been written)** by Edward William Lane.

- 3) have written
- 4) No improvement

Correct Answer: has been written**Candidate Answer:** has been written**QID : 178** - Improve the bracketed part of the sentence.Ashina **(hesitated to listen to)** what her elder sister was saying.**Options:**

- 1) hesitating to listen to
- 2) hesitates in listening to
- 3) hesitate listened to
- 4) No improvement

Correct Answer: No improvement**Candidate Answer:** hesitate listened to**QID : 179** - Improve the bracketed part of the sentence.Nitin assured Ankit that he **(would look at)** his work while he was on leave.**Options:**

- 1) would over look
- 2) would look after
- 3) will look
- 4) No improvement

Correct Answer: would look after**Candidate Answer:** would look after**QID : 180** - Improve the bracketed part of the sentence.**(When the weather was)** cold, I wear monkey cap.**Options:**

- 1) When weather is
- 2) When the weather is
- 3) While the weather is
- 4) No improvement

Correct Answer: When weather is**Candidate Answer:** When the weather is**QID : 181** - In the following question, out of the four alternatives, select the alternative which is the best substitute of the phrase.**Lifeless objects****Options:**

- 1) amateur
- 2) inanimate
- 3) alien
- 4) amnesty

Correct Answer: inanimate**Candidate Answer:** inanimate**QID : 182** - In the following question, out of the four alternatives, select the alternative which is the best substitute of the phrase.**A court or open space usually rectangular and enclosed by a building****Options:**

- 1) quadragenarian
- 2) quadrilateral
- 3) quadrangle
- 4) quadruped

Correct Answer: quadrangle

Candidate Answer: quadrangle

QID : 183 - In the following question, out of the four alternatives, select the alternative which is the best substitute of the phrase.

Bringing about gentle and painless death from incurable disease

Options:

- 1) euthanasia
- 2) sty
- 3) canicide
- 4) suicide

Correct Answer: euthanasia

Candidate Answer: [NOT ANSWERED]

QID : 184 - In the following question, out of the four alternatives, select the alternative which is the best substitute of the phrase.

One who lives on fish

Options:

- 1) carnivorous
- 2) baccivorous
- 3) aurivorous
- 4) piscivorous

Correct Answer: piscivorous

Candidate Answer: piscivorous

QID : 185 - In the following question, out of the four alternatives, select the alternative which is the best substitute of the phrase.

Line at which the earth or sea and sky seem to meet

Options:

- 1) nadir
- 2) zenith
- 3) horizon
- 4) trivet

Correct Answer: horizon

Candidate Answer: horizon

QID : 186 - In the following question, four words are given out of which one word is incorrectly spelt. Select the incorrectly spelt word.

Options:

- 1) stratagem
- 2) repentence
- 3) corrigendum
- 4) alliteration

Correct Answer: repentence

Candidate Answer: stratagem

QID : 187 - In the following question, four words are given out of which one word is incorrectly spelt. Select the incorrectly spelt word.

Options:

- 1) naphthalene
- 2) impeccable
- 3) stupefy
- 4) psychiatrist

Correct Answer: naphthalene

Candidate Answer: stupefy

QID : 188 - In the following question, four words are given out of which one word is incorrectly spelt. Select the incorrectly spelt word.

Options:

- 1) fulfill
- 2) wilful
- 3) skelful
- 4) shameful

Correct Answer: skelful

Candidate Answer: skelful

QID : 189 - In the following question, four words are given out of which one word is incorrectly spelt. Select the incorrectly spelt word.

Options:

- 1) sergant
- 2) pedestal
- 3) scavenger
- 4) luminescent

Correct Answer: sergant

Candidate Answer: scavenger

QID : 190 - In the following question, four words are given out of which one word is incorrectly spelt. Select the incorrectly spelt word.

Options:

- 1) mellifluence
- 2) centenarian
- 3) plebisite
- 4) analysable

Correct Answer: plebisite

Candidate Answer: [NOT ANSWERED]

QID : 191 - In the following passage some of the words have been left out. Read the passage carefully and select the correct answer for the given blank out of the four alternatives.

A _____ is made, not born. The process begins when someone hits upon a bright new way of stating a _____ experience. At that point the remark is an _____. But it is particularly _____ as well as catchy, the saying receives wide circulation as verbal coin. Soon it is likely to be _____ from overwork.

A _____ is made, not born.

Options:

- 1) nuance
- 2) coinage
- 3) cliché
- 4) current

Correct Answer: cliché

Candidate Answer: coinage

QID : 192 - In the following passage some of the words have been left out. Read the passage carefully and select the correct answer for the given blank out of the four alternatives.

A _____ is made, not born. The process begins when someone hits upon a bright new way of stating a _____ experience. At that point the remark is an _____. But it is particularly _____ as well as catchy, the saying receives wide circulation as verbal coin. Soon it is likely to be _____ from overwork.

new way of stating a _____ experience.

Options:

- 1) common
- 2) authentic
- 3) mental
- 4) rational

Correct Answer: common

Candidate Answer: rational

QID : 193 - In the following passage some of the words have been left out. Read the passage carefully and select the correct answer for the given blank out of the four alternatives.

A _____ is made, not born. The process begins when someone hits upon a bright new way of stating a _____ experience. At that point the remark is an _____. But it is particularly _____ as well as catchy, the saying receives wide circulation as verbal coin. Soon it is likely to be _____ from overwork.

the remark is an _____.

Options:

- 1) epigram
- 2) epitaph
- 3) epilogue
- 4) epicenter

Correct Answer: epigram

Candidate Answer: epigram

QID : 194 - In the following passage some of the words have been left out. Read the passage carefully and select the correct answer for the given blank out of the four alternatives.

A _____ is made, not born. The process begins when someone hits upon a bright new way of stating a _____ experience. At that point the remark is an _____. But it is particularly _____ as well as catchy, the saying receives wide circulation as verbal coin. Soon it is likely to be _____ from overwork.

it is particularly _____ as well as catchy

Options:

- 1) vague
- 2) apt
- 3) ingenuine
- 4) emotional

Correct Answer: apt

Candidate Answer: ingenuine

QID : 195 - In the following passage some of the words have been left out. Read the passage carefully and select the correct answer for the given blank out of the four alternatives.

A _____ is made, not born. The process begins when someone hits upon a bright new way of stating a _____ experience. At that point the remark is an _____. But it is particularly _____ as well as catchy, the saying receives wide circulation as verbal coin. Soon it is likely to be _____ from overwork.

likely to be _____ from overwork.

Options:

- 1) judged
- 2) suffering
- 3) overlooked
- 4) inducing

Correct Answer: suffering

Candidate Answer: inducing

QID : 196 - A passage is given with five questions following it. Read the passage carefully and select the best answer to each question out of the given four alternatives.

The rural economy is an important segment of the ecosystem and accounts for around 70 percent of employment and 50 percent of GDP with agriculture being the main driver followed by services and manufacturing. It is largely unorganized and hence those working in rural India or consuming in this economy are a different category of economic agents driven by different factors. The economy is quite complex in so far as the fact that cash dominates in terms of transactions and while there has been some intrusion of the use of credit (kisan) and debit cards and ATMs, dependence on technology driven payments system is limited. This has hence also become a haven for routing black money both in terms of seeking tax exemptions by channeling funds, to convert to legitimate funds. But a lot of black money gets into land and ' apparent rural activity '

. Now consider some aspects of this economy and the cash conundrum. Almost all transactions in the mandis (there are above 7,000 organized ones and over double the number that is unorganized), are based on cash as it is easy to use. The farmers prefer to receive cash and while some do take in cheques there is a sense of doubt if the counter party is unknown. Hence one reason why electronic mandis is a good idea is that payments can also be made through the electronic mode as all transactions would be e-enabled. The recent demonetization has caused significant distortions as farmers are unable to sell their goods. This has happened just when we are in middle of the kharif harvest which involves rice, soybean, cotton, maize, sugarcane, bajra, besides fruits and vegetables which are all year through. The second issue for Indian agriculture is the rabi season which has begun where farmers start sowing their seeds. The issue here is less serious as a large part is backed by credit where the prevalent cash crunch may not matter. It would only be at the margin that farmers may be impacted, and hence the pain here would be secondary.

According to the passage, which among the following is the major contributor to India's GDP growth?

Options:

- 1) Services
- 2) Agriculture
- 3) Manufacturing
- 4) FDIs

Correct Answer: Agriculture

Candidate Answer: Agriculture

QID : 197 - A passage is given with five questions following it. Read the passage carefully and select the best answer to each question out of the given four alternatives.

The rural economy is an important segment of the ecosystem and accounts for around 70 percent of employment and 50 percent of GDP with agriculture being the main driver followed by services and manufacturing. It is largely unorganized and hence those working in rural India or consuming in this economy are a different category of economic agents driven by different factors. The economy is quite complex in so far as the fact that cash dominates in terms of transactions and while there has been some intrusion of the use of credit (kisan) and debit cards and ATMs, dependence on technology driven payments system is limited. This has hence also become a haven for routing black money both in terms of seeking tax exemptions by channeling funds, to convert to legitimate funds. But a lot of black money gets into land and ' apparent rural activity '

. Now consider some aspects of this economy and the cash conundrum. Almost all transactions in the mandis (there are above 7,000 organized ones and over double the number that is unorganized), are based on cash as it is easy to use. The farmers prefer to receive cash and while some do take in cheques there is a sense of doubt if the counter party is unknown. Hence one reason why electronic mandis is a good idea is that payments can also be made through the electronic mode as all transactions would be e-enabled. The recent demonetization has caused significant distortions as farmers are unable to sell their goods. This has happened just when we are in middle of the kharif harvest which involves rice, soybean, cotton, maize, sugarcane, bajra, besides fruits and vegetables which are all year through. The second issue for Indian agriculture is the rabi season which has begun where farmers start sowing their seeds. The issue here is less serious as a large part is backed by credit where the prevalent cash crunch may not matter. It would only be at the margin that farmers may be impacted, and hence the pain here would be secondary.

What has become a haven for routing black money in India?

Options:

- 1) Cash transactions over digital cash transactions
- 2) Intrusion of credit cards
- 3) Prevailing debit cards
- 4) Technology driven payment

Correct Answer: Cash transactions over digital cash transactions

Candidate Answer: Technology driven payment

QID : 198 - A passage is given with five questions following it. Read the passage carefully and select the best answer to each question out of the given four alternatives.

The rural economy is an important segment of the ecosystem and accounts for around 70 percent of employment and 50 percent of GDP with agriculture being the main driver followed by services and manufacturing. It is largely unorganized and hence those working in rural India or consuming in this economy are a different category of economic agents driven by different factors. The economy is quite complex in so far as the fact that cash dominates in terms of transactions and while there has been some intrusion of the use of credit (kisan) and debit cards and ATMs, dependence on technology driven payments system is limited. This has hence also become a haven for routing black money both in terms of seeking tax exemptions by channeling funds, to convert to legitimate funds. But a lot of black money gets into land and ' apparent rural activity '

. Now consider some aspects of this economy and the cash conundrum. Almost all transactions in the mandis (there are above 7,000 organized ones and over double the number that is unorganized), are based on cash as it is easy to use. The farmers prefer to receive cash and while some do take in cheques there is a sense of doubt if the counter party is unknown. Hence one reason why electronic mandis is a good idea is that payments can also be made through the electronic mode as all transactions would be e-enabled. The recent demonetization has caused significant distortions as farmers are unable to sell their goods. This has happened just when we are in middle of the kharif harvest which involves rice, soybean, cotton, maize, sugarcane, bajra, besides fruits and vegetables which are all year through. The second issue for Indian agriculture is the rabi season which has begun where farmers start sowing their seeds. The issue here is less serious as a large part is backed by credit where the prevalent cash crunch may not matter. It would only be at the margin that farmers may be impacted, and hence the pain here would be secondary.

Which among the following is not a kharif crop?

Options:

- 1) Bajra
- 2) Maize
- 3) Rice
- 4) Wheat

Correct Answer: Wheat

Candidate Answer: Wheat

QID : 199 - A passage is given with five questions following it. Read the passage carefully and select the best answer to each question out of the given four alternatives.

The rural economy is an important segment of the ecosystem and accounts for around 70 percent of employment and 50 percent of GDP with agriculture being the main driver followed by services and manufacturing. It is largely unorganized and hence those working in rural India or consuming in this economy are a different category of economic agents driven by different factors. The economy is quite complex in so far as the fact that cash dominates in terms of transactions and while there has been some intrusion of the use of credit (kisan) and debit cards and ATMs, dependence on technology driven payments system is limited. This has hence also become a haven for routing black money both in terms of seeking tax exemptions by channeling funds, to convert to legitimate funds. But a lot of black money gets into land and ' apparent rural activity '

. Now consider some aspects of this economy and the cash conundrum. Almost all transactions in the mandis (there are above 7,000 organized ones and over double the number that is unorganized), are based on cash as it is easy to use. The farmers prefer to receive cash and while some do take in cheques there is a sense of doubt if the counter party is unknown. Hence one reason why electronic mandis is a good idea is that payments can also be made through the electronic mode as all transactions would be e-enabled. The recent demonetization has caused significant distortions as farmers are unable to sell their goods. This has happened just when we are in middle of the kharif harvest which involves rice, soybean, cotton, maize, sugarcane, bajra, besides fruits and vegetables which are all year through. The second issue for Indian agriculture is the rabi season which has begun where farmers start sowing their seeds. The issue here is less serious as a large part is backed by credit where the prevalent cash crunch may not matter. It would only be at the margin that farmers may be impacted, and hence the pain here would be secondary.

Why does demonetisation has lesser impact onto the rabi season?

Options:

- 1) Due to tax exemptions
- 2) Due to digital payments
- 3) Due to credit payments
- 4) Huge margins

Correct Answer: Due to credit payments

Candidate Answer: Due to credit payments

QID : 200 - A passage is given with five questions following it. Read the passage carefully and select the best answer to each question out of the given four alternatives.

The rural economy is an important segment of the ecosystem and accounts for around 70 percent of employment and 50 percent of GDP with agriculture being the main driver followed by services and manufacturing. It is largely unorganized and hence those working in rural India or consuming in this economy are a different category of economic agents driven by different factors. The economy is quite complex in so far as the fact that cash dominates in terms of transactions and while there has been some intrusion of the use of credit (kisan) and debit cards and ATMs, dependence on technology driven payments system is limited. This has hence also become a haven for routing black money both in terms of seeking tax exemptions by channeling funds, to convert to legitimate funds. But a lot of black money gets into land and ' apparent rural activity '

. Now consider some aspects of this economy and the cash conundrum. Almost all transactions in the mandis (there are above 7,000 organized ones and over double the number that is unorganized), are based on cash as it is easy to use. The farmers prefer to receive cash and while some do take in cheques there is a sense of doubt if the counter party is unknown. Hence one reason why electronic mandis is a good idea is that payments can also be made through the electronic mode as all transactions would be e-enabled. The recent demonetization has caused significant distortions as farmers are unable to sell their goods. This has happened just when we are in middle of the kharif harvest which involves rice, soybean, cotton, maize, sugarcane, bajra, besides fruits and vegetables which are all year through. The second issue for Indian agriculture is the rabi season which has begun where farmers start sowing their seeds. The issue here is less serious as a large part is backed by credit where the prevalent cash crunch may not matter. It would only be at the margin that farmers may be impacted, and hence the pain here would be secondary.

Which of the following is not true in regards to rural economy?

Options:

- 1) It account for major percent in employmenting the people of the country.
- 2) It has a technology driven mandis.
- 3) Major transactions are based on cash.
- 4) Demonetization has caused significant distortions in rural economy especially to farmers.

Correct Answer: It has a technology driven mandis.

Candidate Answer: Major transactions are based on cash.

